

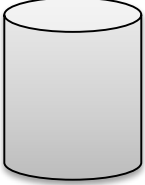
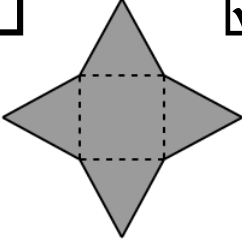
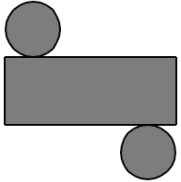
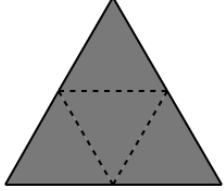

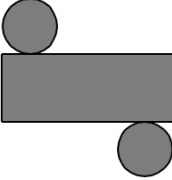
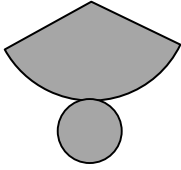
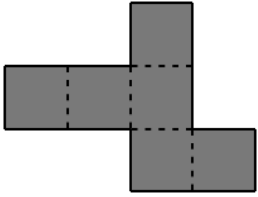
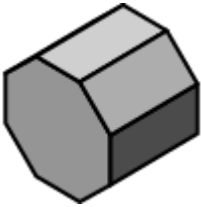
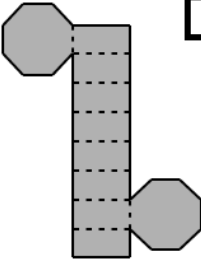
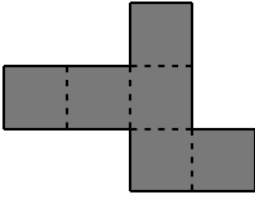
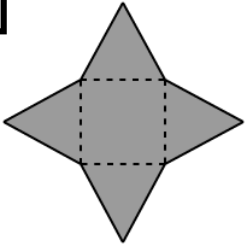
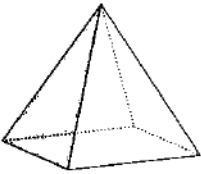
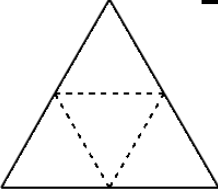
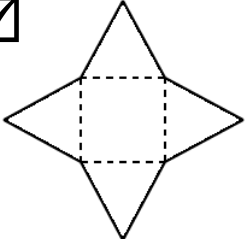
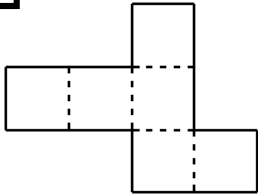
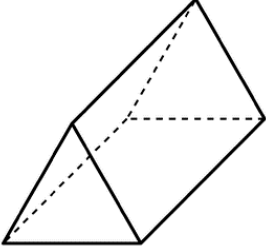
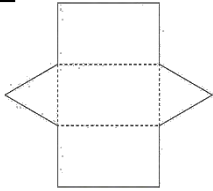
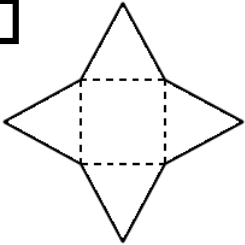
# Identifying nets

## Grade 5 Geometry Worksheet

Which nets on the right can make the shape on the left?

	<input type="checkbox"/>	<input type="checkbox"/>	<input type="checkbox"/>
	<input type="checkbox"/>	<input type="checkbox"/>	<input type="checkbox"/>
	<input type="checkbox"/>	<input type="checkbox"/>	<input type="checkbox"/>
	<input type="checkbox"/>	<input type="checkbox"/>	<input type="checkbox"/>
	<input type="checkbox"/>	<input type="checkbox"/>	<input type="checkbox"/>

Answers

	<input type="checkbox"/> 	<input checked="" type="checkbox"/> 	<input type="checkbox"/> 
	<input type="checkbox"/> 	<input checked="" type="checkbox"/> 	<input type="checkbox"/> 
	<input checked="" type="checkbox"/> 	<input type="checkbox"/> 	<input type="checkbox"/> 
	<input type="checkbox"/> 	<input checked="" type="checkbox"/> 	<input type="checkbox"/> 
	<input checked="" type="checkbox"/> 	<input type="checkbox"/> 	<input type="checkbox"/> 