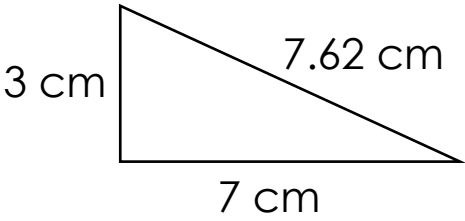
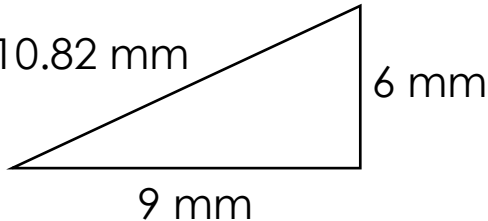
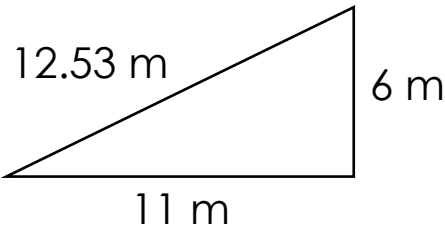
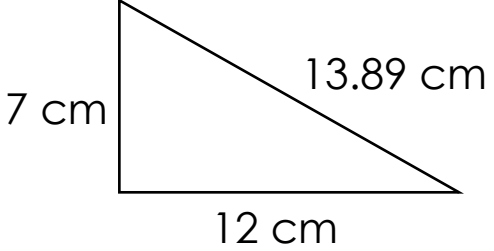


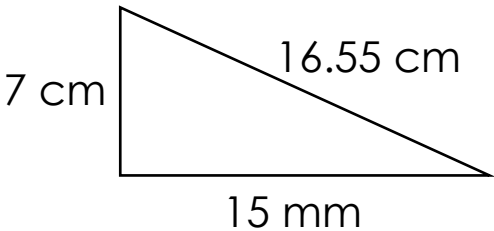
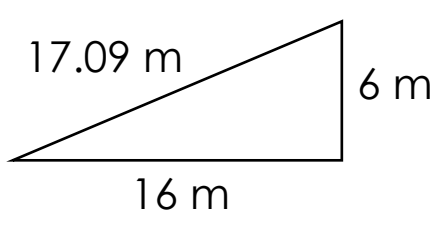
Area of right triangles

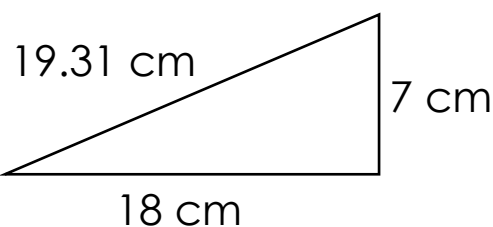
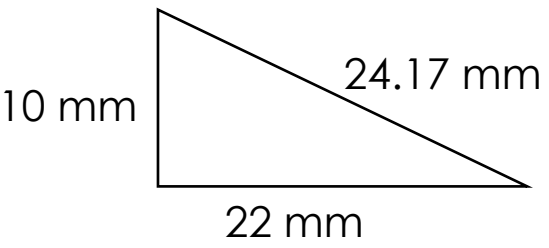
Grade 5 Geometry Worksheet

Find the area.

1. 
2. 
-

3. 
4. 
-

5. 
6. 
-

7. 
8. 
-

Answers

1) $A = 10.5 \text{ cm}^2$

2) $A = 27 \text{ m}^2$

3) $A = 33 \text{ m}^2$

4) $A = 42 \text{ cm}^2$

5) $A = 52.5 \text{ cm}^2$

6) $A = 48 \text{ m}^2$

7) $A = 63 \text{ cm}^2$

8) $A = 110 \text{ mm}^2$