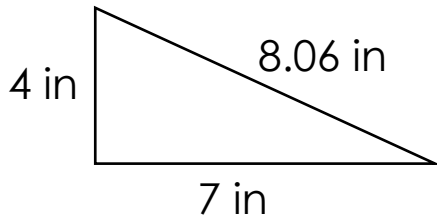


Area of right triangles

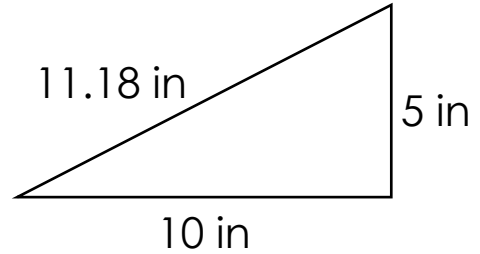
Grade 5 Geometry Worksheet

Find the area.

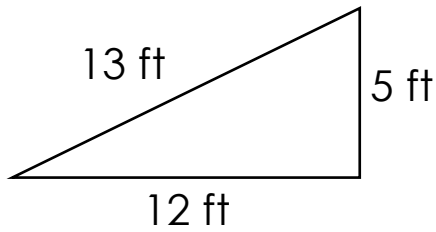
1.



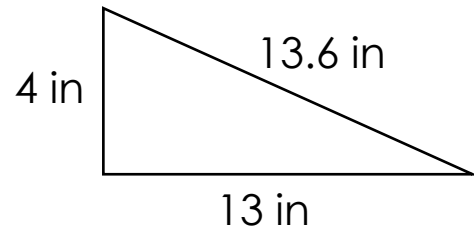
2.



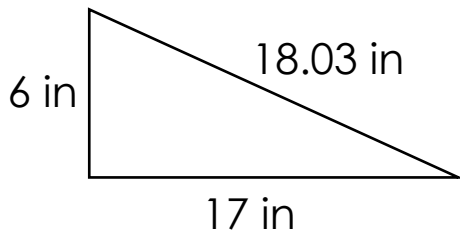
3.



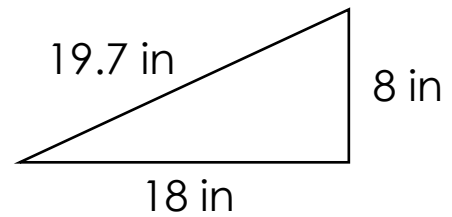
4.



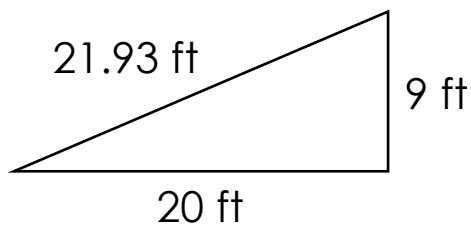
5.



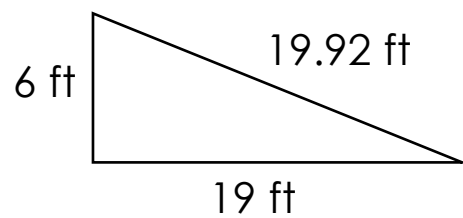
6.



7.



8.



Answers

1) $A = 14 \text{ in}^2$

2) $A = 25 \text{ in}^2$

3) $A = 30 \text{ ft}^2$

4) $A = 26 \text{ in}^2$

5) $A = 51 \text{ in}^2$

6) $A = 72 \text{ in}^2$

7) $A = 90 \text{ ft}^2$

8) $A = 47.5 \text{ ft}^2$