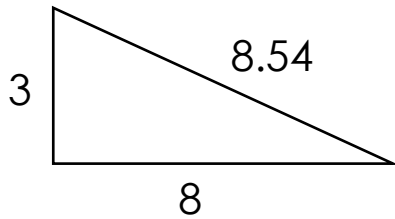


# Area of right triangles

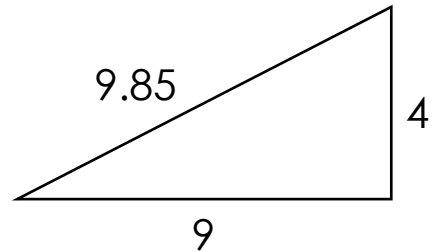
## Grade 5 Geometry Worksheet

Find the area.

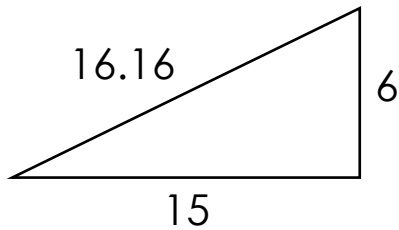
1.



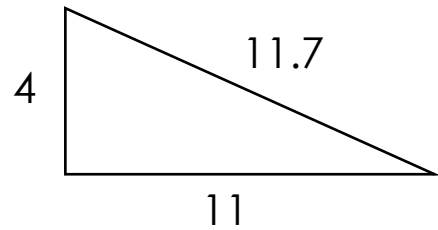
2.



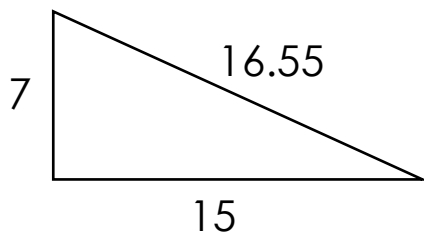
3.



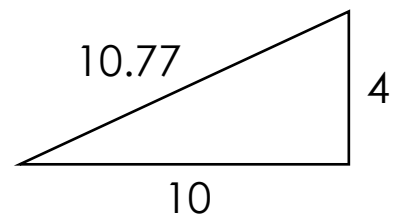
4.



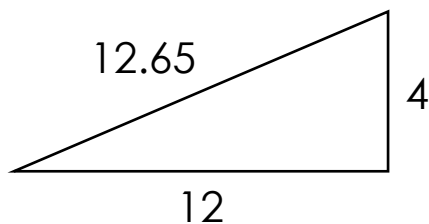
5.



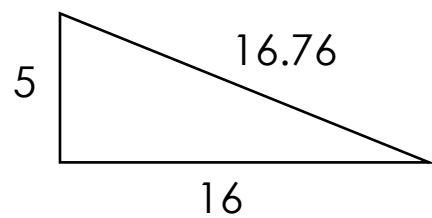
6.



7.



8.



## Answers

1)  $A = 12$

2)  $A = 18$

3)  $A = 45$

4)  $A = 22$

5)  $A = 52.5$

6)  $A = 20$

7)  $A = 24$

8)  $A = 40$