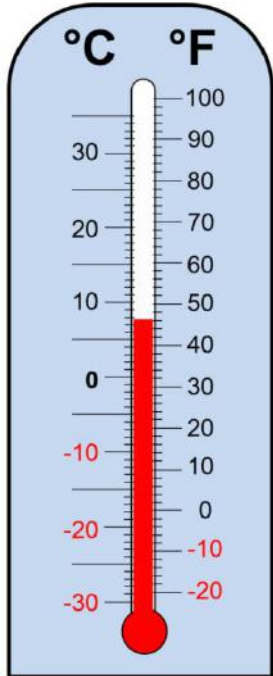


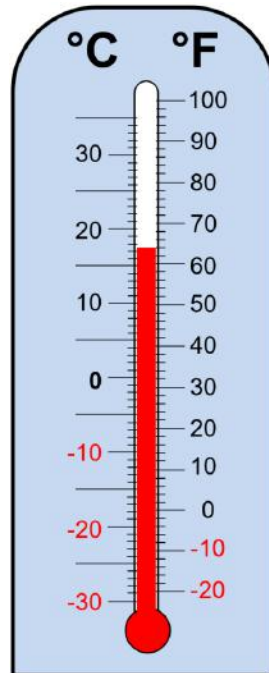
Reading thermometers in Fahrenheit and Celsius

Grade 4 Measurement Worksheet

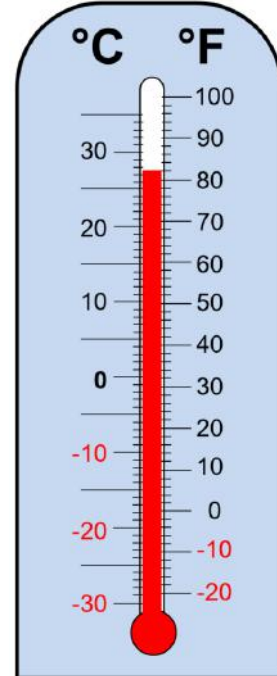
Write down the temperature indicated by each of the following thermometers.



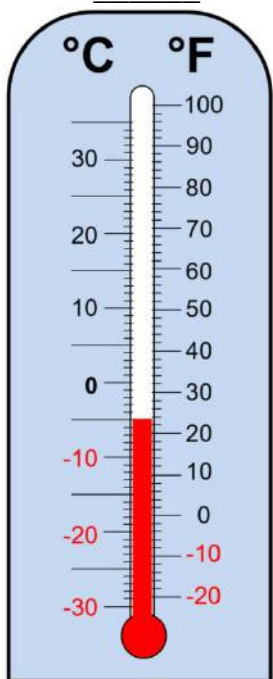
_____ °C
_____ °F



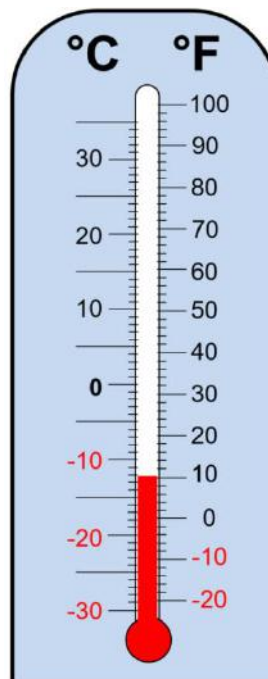
_____ °C
_____ °F



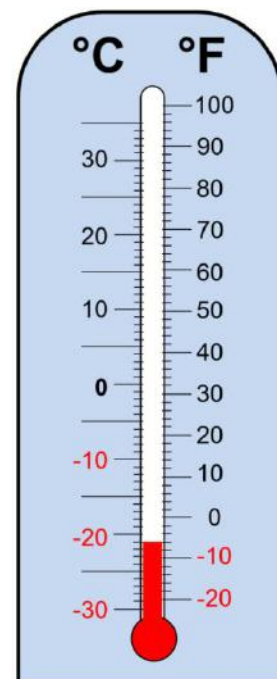
_____ °C
_____ °F



_____ °C
_____ °F



_____ °C
_____ °F



_____ °C
_____ °F

Answers

1. 8°C , 46°F
2. 18°C , 64°F
3. 28°C , 82°F
4. -5°C , 22°F
5. -12°C , 10°F
6. -21°C , 6°F