


# Capacity charts

## Grade 4 Measurement Worksheet

Complete the chart by drawing the correct number of measures.



1 gallon



1 quart



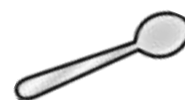
1 pint



1 cup



1 ounce



1 tablespoon



1 teaspoon

Example:






1 ounce



=




tablespoons

1.	1 ounce		=		teaspoons
2.	1 pint		=		ounces
3.	1 quart		=		cups
4.	1 cup		=		tablespoons
5.	1 gallon		=		pints

## Answers



1 gallon



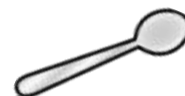
1 quart



1 pint



1 cup



1 tablespoon



1 ounce



1 teaspoon

Example:

1 ounce



=



tablespoons

1.

1 ounce



=



teaspoons

2.

1 pint



=



ounces

3.

1 quart



=




cups

4.

1 cup



=



tablespoons

5.

1 gallon



=



pints