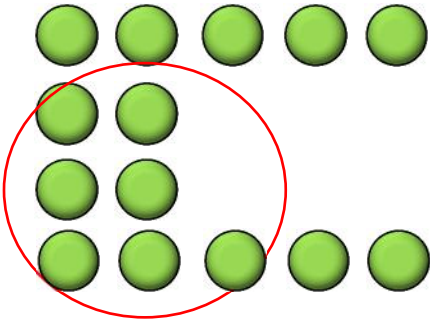


Subtraction sentences

Grade 2 Subtraction Worksheet

Some balls are being taken away.

Circle the correct equation and answer it.

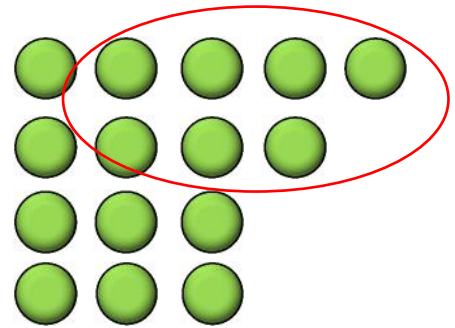


$$7 + 14 = \underline{\quad}$$

$$14 + 7 = \underline{\quad}$$

$$7 - 14 = \underline{\quad}$$

$$14 - 7 = \underline{\quad}$$

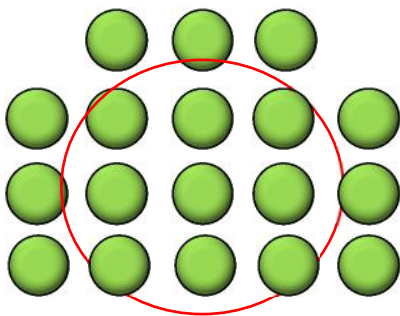


$$15 - 7 = \underline{\quad}$$

$$15 + 7 = \underline{\quad}$$

$$7 - 15 = \underline{\quad}$$

$$7 + 15 = \underline{\quad}$$

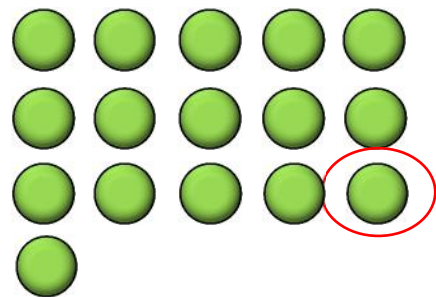


$$9 - 18 = \underline{\quad}$$

$$18 + 9 = \underline{\quad}$$

$$9 + 18 = \underline{\quad}$$

$$18 - 9 = \underline{\quad}$$



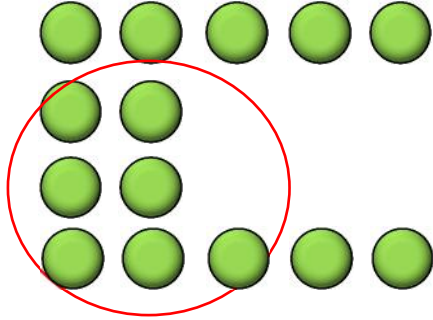
$$16 + 1 = \underline{\quad}$$

$$16 - 1 = \underline{\quad}$$

$$1 + 16 = \underline{\quad}$$

$$16 + 1 = \underline{\quad}$$

Answers

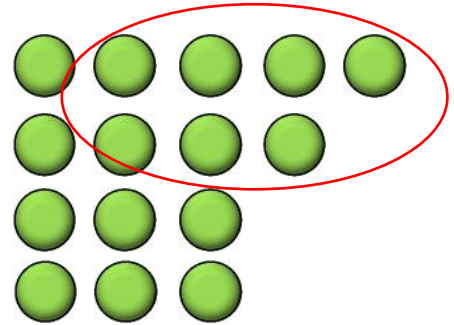


$$7 + 14 = \underline{\quad}$$

$$14 + 7 = \underline{\quad}$$

$$7 - 14 = \underline{\quad}$$

$$14 - 7 = 7$$

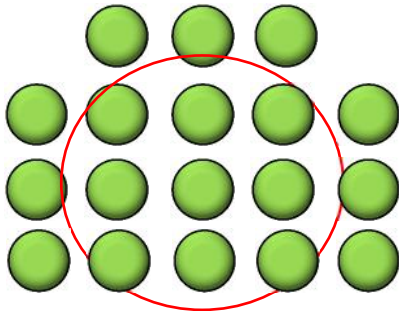


$$15 - 7 = 8$$

$$15 + 7 = \underline{\quad}$$

$$7 - 15 = \underline{\quad}$$

$$7 + 15 = \underline{\quad}$$

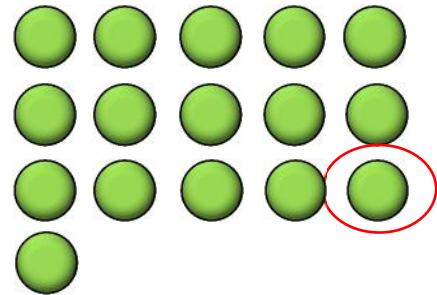


$$9 - 18 = \underline{\quad}$$

$$18 + 9 = \underline{\quad}$$

$$9 + 18 = \underline{\quad}$$

$$18 - 9 = 9$$



$$16 + 1 = \underline{\quad}$$

$$16 - 1 = 15$$

$$1 + 16 = \underline{\quad}$$

$$16 + 1 = \underline{\quad}$$