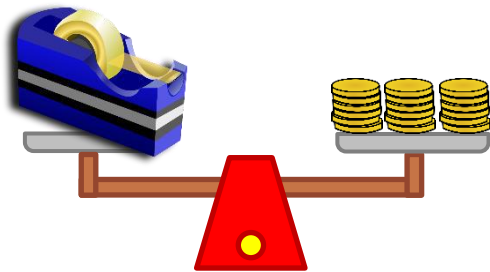


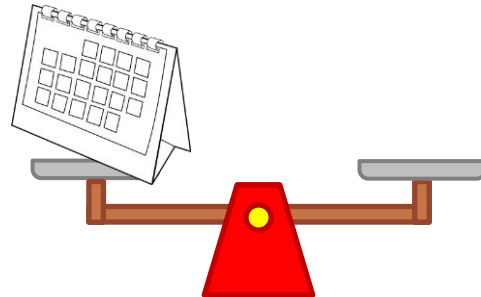
Measuring weight in ounces

Grade 2 Measurement Worksheet

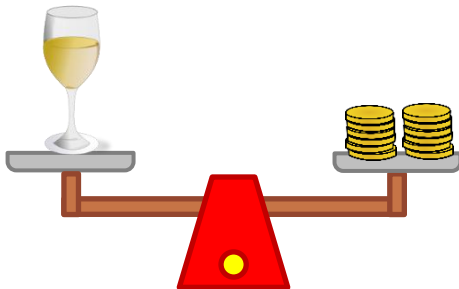
A **stack of coins** weighs **2 ounces**. A **slice of bread** weighs **1 ounce**. Draw coins and bread slices to balance the scales.



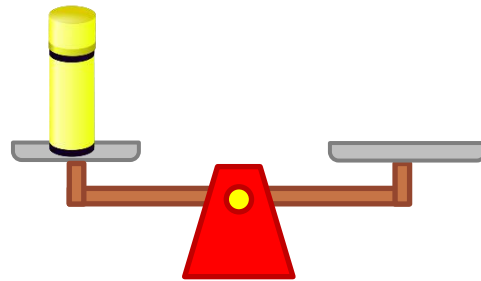
The tape dispenser weighs 8 oz.



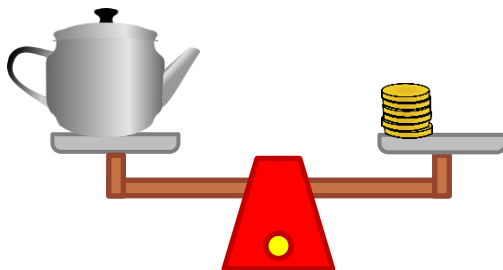
The calendar weighs 3 oz.



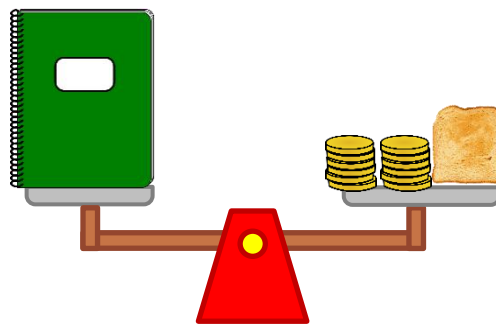
The glass weighs 5 oz.



The glue stick weighs 1 oz.



The teapot weighs 6 oz.



The notebook weighs 7 oz.

Which is the lightest object? _____

What would a teapot and a calendar weigh together? _____

Answers

Answers may vary.

Students can substitute a slice of bread for stacks of coins or vice-versa.

Which is the lightest object?

The lightest object is the glue stick.

What would a teapot and a calendar weigh together?

9 ounces