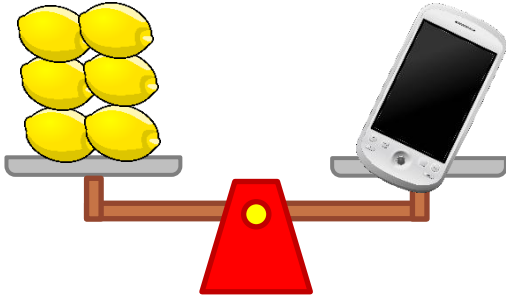
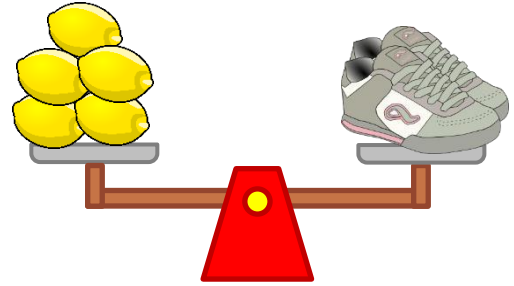


Measuring weight with non-standard units

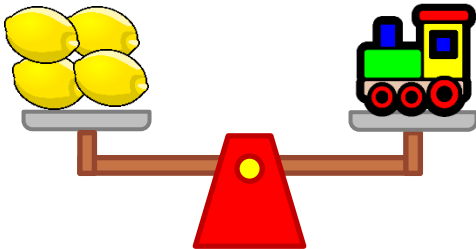
Grade 2 Measurement Worksheet



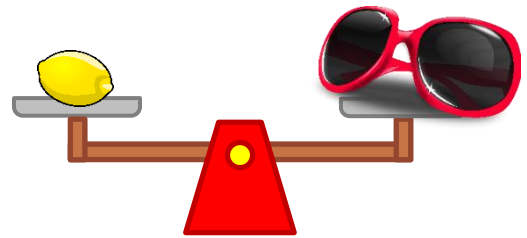
The weight of the phone is _____lemons.



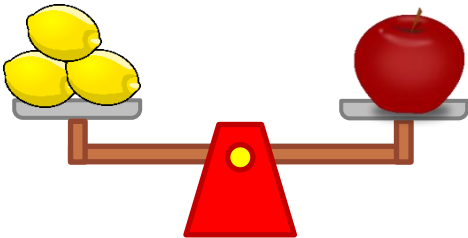
The weight of the shoes is _____lemons.



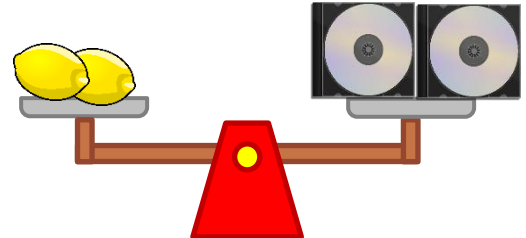
The weight of the toy train is _____lemons.



The weight of the sunglasses is _____lemons.



The weight of the apple is _____lemons.



The weight of the CDs is _____lemons.

Which is heavier: the toy train or the phone? _____

Which is heavier: the CD or the apple? _____

Answers

The weight of the phone is **6 lemons**.

The weight of the shoes is **5 lemons**.

The weight of the toy train is **4 lemons**.

The weight of the sunglasses is **1 lemon**.

The weight of the apple is **3 lemons**.

The weight of the CDs is **2 lemons**.

Which is heavier: the toy train or the phone?

The phone.

Which is heavier: the CD or the apple?

The apple.