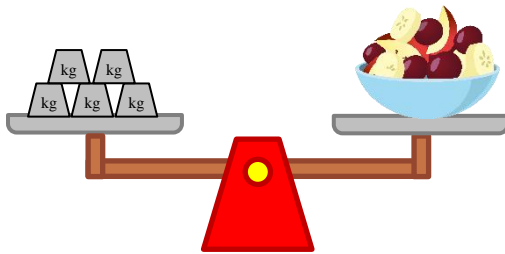


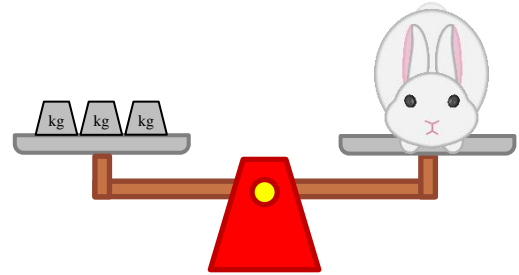
# Measure weights in kilograms

## Grade 2 Measurement Worksheet

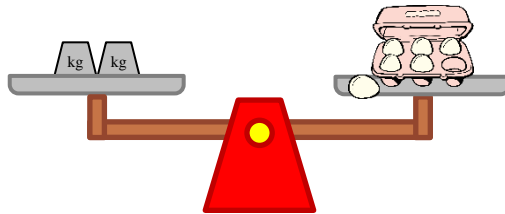
 = 1 kilogram



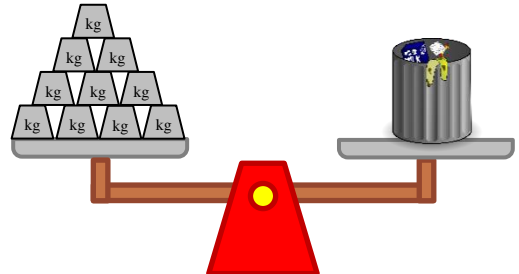
The fruit salad weighs \_\_\_\_ kg.



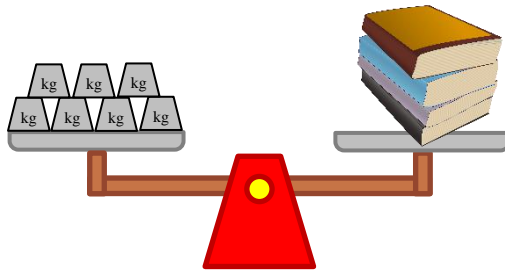
The rabbit weighs \_\_\_\_ kg.



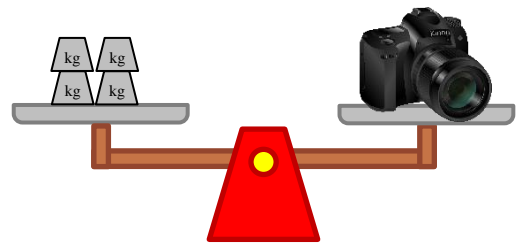
The carton of eggs weighs \_\_\_\_ kg.



The trash can weighs \_\_\_\_ kg.



The stack of books weighs \_\_\_\_ kg.



The camera weighs \_\_\_\_ kg.

How much heavier is the stack of books than the rabbit? \_\_\_\_\_

How much heavier is the trash can than the camera? \_\_\_\_\_

## Answers

The fruit salad weighs **5** kg.

The rabbit weighs **3** kg.

The carton of eggs weighs **2** kg.

The trash can weighs **10** kg.

The stack of books weighs **7** kg.

The camera bottle weighs **4** kg.

How much heavier is the stack of books than the rabbit?

**4 kilograms**

How much heavier is the trash can than the camera?

**6 kilograms**