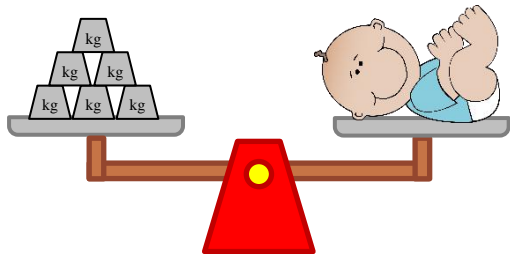


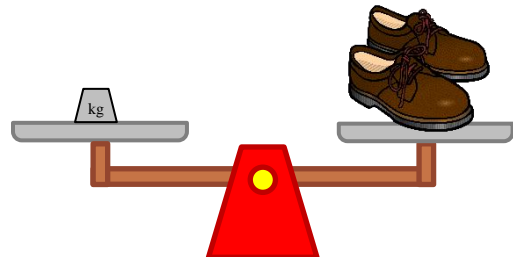
Measure weights in kilograms

Grade 2 Measurement Worksheet

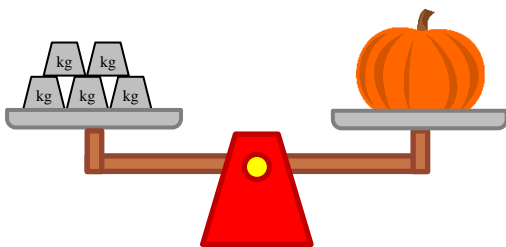
 = 1 kilogram



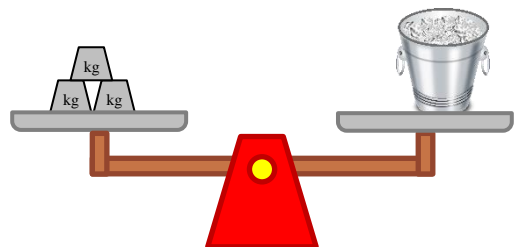
The baby weighs ____ kg.



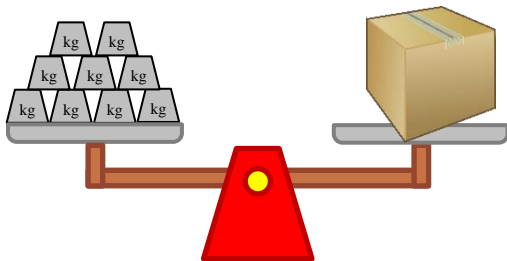
The pair of shoes weighs ____ kg.



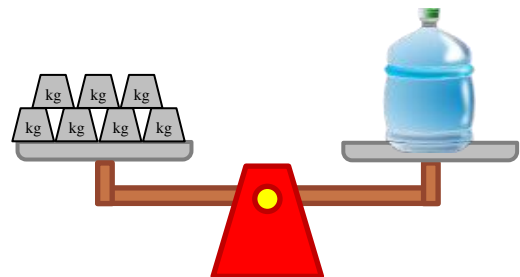
The pumpkin weighs ____ kg.



The ice bucket weighs ____ kg.



The box weighs ____ kg.



The water bottle weighs ____ kg.

How much heavier is the water bottle than the baby? _____

How much heavier is the box than the pumpkin? _____

Answers

The baby weighs **6** kg.

The pair of shoes weighs **1** kg.

The pumpkin weighs **5** kg.

The ice bucket weighs **3** kg.

The box weighs **9** kg.

The water bottle weighs **7** kg.

How much heavier is the water bottle than the baby?

1 kilogram

How much heavier is the box than the pumpkin?

4 kilograms