

Units of length (centimeters and meters)

Grade 2 Measurement Worksheet

Fill in the proper units (**cm** or **m**) for each measurement.


1 meter = 100 centimeters

Length of a pair of sunglasses



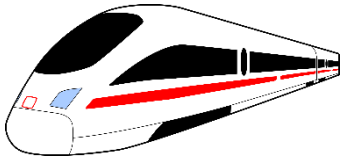
20 _____

Length of an alligator



2 _____

Length of a city train




65 _____

Length of a car



4 _____

Height of an ostrich



1 _____

Length of a toothbrush



18 _____

Answers

Length of a pair of sunglasses: 20 **cm**

Length of an alligator: 2 **m**

Length of a city train: 65 **m**

Length of a car: 4 **m**

Height of an ostrich: 1 **m**

Length of a toothbrush: 18 **cm**