







Units of length (inches, feet & yards)

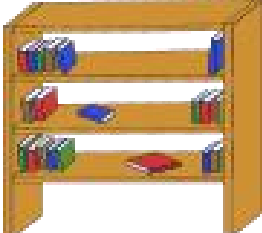
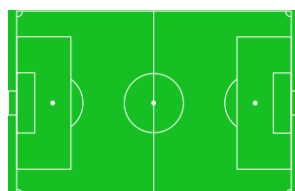

Grade 2 Measurement Worksheet

Circle the proper unit “**inches**”, “**feet**”, or “**yards**” for each object.




1 yard = 3 feet
1 foot = 12 inches




<p>Length of a pencil</p> 	<p>Length of track</p> 	<p>Height of a candlestick</p> 
inches / feet / yards	inches / feet / yards	inches / feet / yards

<p>Width of a shirt</p> 	<p>Height of a building</p> 	<p>Height of a fridge</p> 
inches / feet / yards	inches / feet / yards	inches / feet / yards

<p>Width of a bookcase</p> 	<p>Length of a soccer field</p> 	<p>Width of a book</p> 
inches / feet / yards	inches / feet / yards	inches / feet / yards

Answers

<p>Length of a pencil</p> 	<p>Length of track</p> 	<p>Height of a candlestick</p> 
<p>inches / feet / yards</p>	<p>inches / feet / yards</p>	<p>inches / feet / yards</p>

<p>Width of a shirt</p> 	<p>Height of a building</p> 	<p>Height of a fridge</p> 
<p>inches / feet / yards</p>	<p>inches / feet / yards</p>	<p>inches / feet / yards</p>

<p>Width of a bookcase</p> 	<p>Length of a soccer field</p> 	<p>Width of a book</p> 
<p>inches / feet / yards</p>	<p>inches / feet / yards</p>	<p>inches / feet / yards</p>