


Capacity: More or less than 1 liter?


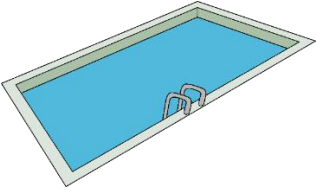




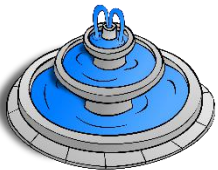


Grade 2 Measurement Worksheet

Does it hold more or less than 1 liter? Circle the correct answer.

Hint: 1 liter = 1000 mL

<p>A bottle of hand soap</p> 	<p>A swimming pool</p> 	<p>A salt shaker</p> 
<p>Less than / More than</p>	<p>Less than / More than</p>	<p>Less than / More than</p>
<p>A backpack</p> 	<p>A glass</p> 	<p>An aquarium</p> 
<p>Less than / More than</p>	<p>Less than / More than</p>	<p>Less than / More than</p>
<p>Water fountain</p> 	<p>Paper cup</p> 	<p>Ketchup bottle</p> 
<p>Less than / More than</p>	<p>Less than / More than</p>	<p>Less than / More than</p>

Answers

<p>A bottle of hand soap</p> 	<p>A swimming pool</p> 	<p>A salt shaker</p> 
<p>Less than</p>	<p>More than</p>	<p>Less than</p>
<p>A backpack</p> 	<p>A glass</p> 	<p>An aquarium</p> 
<p>More than</p>	<p>Less than</p>	<p>More than</p>
<p>Water fountain</p> 	<p>Paper cup</p> 	<p>Ketchup bottle</p> 
<p>More than</p>	<p>Less than</p>	<p>Less than</p>