
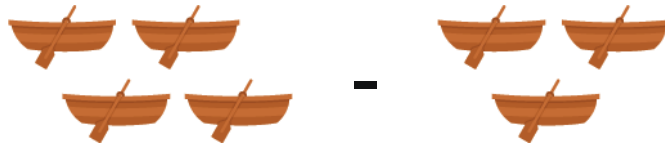


Subtract boats

Grade 1 Subtraction Worksheet

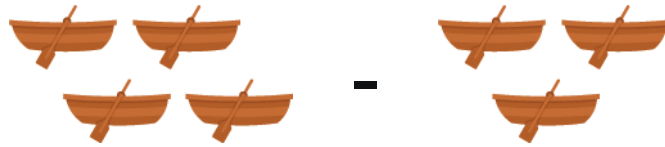
Some boats are taken away.

Write the subtraction sentence in the box. Answer it!



Subtract boats


Answers:



$$4 - 3 = 1$$



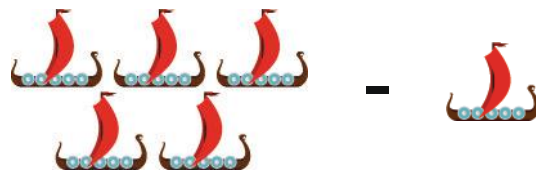
$$8 - 8 = 0$$



$$9 - 7 = 2$$



$$6 - 2 = 4$$



$$5 - 1 = 4$$