
















Vertical addition

Grade 1 Addition Worksheet

How many traffic lights are there?

$\begin{array}{r} 2 \\ + 5 \\ \hline \\ \hline \end{array}$  	$\begin{array}{r} 3 \\ + 7 \\ \hline \\ \hline \end{array}$  
$\begin{array}{r} 1 \\ + 8 \\ \hline \\ \hline \end{array}$  	$\begin{array}{r} 4 \\ + 6 \\ \hline \\ \hline \end{array}$  
$\begin{array}{r} 7 \\ + 2 \\ \hline \\ \hline \end{array}$  	$\begin{array}{r} 3 \\ + 3 \\ \hline \\ \hline \end{array}$  
$\begin{array}{r} 5 \\ + 0 \\ \hline \\ \hline \end{array}$ 	$\begin{array}{r} 6 \\ + 2 \\ \hline \\ \hline \end{array}$  

Vertical addition

Answers:

$\begin{array}{r} 2 \quad \text{🚦} \text{🚦} \\ + 5 \quad \text{🚦} \text{🚦} \text{🚦} \text{🚦} \text{🚦} \\ \hline 7 \end{array}$	$\begin{array}{r} 3 \quad \text{🚦} \text{🚦} \text{🚦} \\ + 7 \quad \text{🚦} \text{🚦} \text{🚦} \text{🚦} \text{🚦} \text{🚦} \text{🚦} \\ \hline 10 \end{array}$
$\begin{array}{r} 1 \quad \text{🚦} \\ + 8 \quad \text{🚦} \text{🚦} \text{🚦} \text{🚦} \text{🚦} \text{🚦} \text{🚦} \text{🚦} \\ \hline 9 \end{array}$	$\begin{array}{r} 4 \quad \text{🚦} \text{🚦} \text{🚦} \text{🚦} \\ + 6 \quad \text{🚦} \text{🚦} \text{🚦} \text{🚦} \text{🚦} \text{🚦} \\ \hline 10 \end{array}$
$\begin{array}{r} 7 \quad \text{🚦} \text{🚦} \text{🚦} \text{🚦} \text{🚦} \text{🚦} \text{🚦} \\ + 2 \quad \text{🚦} \text{🚦} \\ \hline 9 \end{array}$	$\begin{array}{r} 3 \quad \text{🚦} \text{🚦} \text{🚦} \\ + 3 \quad \text{🚦} \text{🚦} \text{🚦} \\ \hline 6 \end{array}$
$\begin{array}{r} 5 \quad \text{🚦} \text{🚦} \text{🚦} \text{🚦} \text{🚦} \\ + 0 \\ \hline 5 \end{array}$	$\begin{array}{r} 6 \quad \text{🚦} \text{🚦} \text{🚦} \text{🚦} \text{🚦} \text{🚦} \\ + 2 \quad \text{🚦} \text{🚦} \\ \hline 8 \end{array}$