

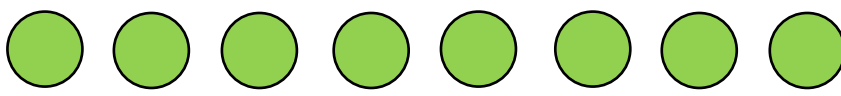
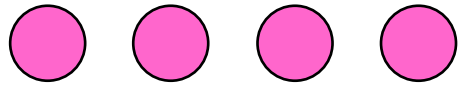






# Subtraction using pictures

## Grade 1 Subtraction Worksheet

Count the circles. Write the total. Then, cross out circles according to the equation, and write the difference.

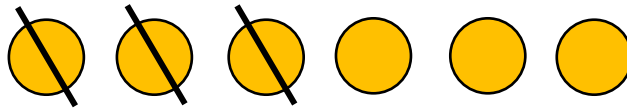
 $7 - 2 = \underline{5}$	Total: <u>7</u>
 $6 - 3 = \underline{\quad}$	Total: <u>        </u>
 $8 - 6 = \underline{\quad}$	Total: <u>        </u>
 $4 - 1 = \underline{\quad}$	Total: <u>        </u>
 $9 - 4 = \underline{\quad}$	Total: <u>        </u>
 $7 - 5 = \underline{\quad}$	Total: <u>        </u>
 $10 - 3 = \underline{\quad}$	Total: <u>        </u>

## Answers



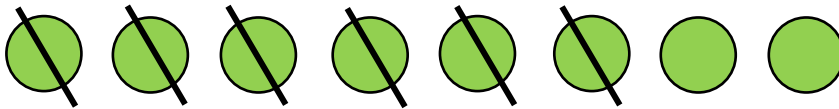
$$7 - 2 = \underline{5}$$

Total: 7



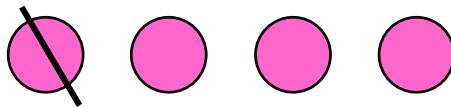
$$6 - 3 = \underline{3}$$

Total: 6




$$8 - 6 = \underline{2}$$

Total: 8



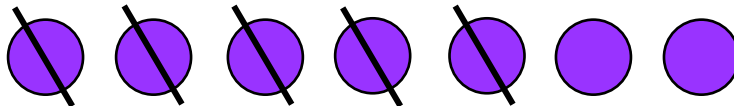
$$4 - 1 = \underline{3}$$

Total: 4




$$9 - 4 = \underline{5}$$

Total: 9



$$7 - 5 = \underline{2}$$

Total: 7



$$10 - 3 = \underline{7}$$

Total: 10