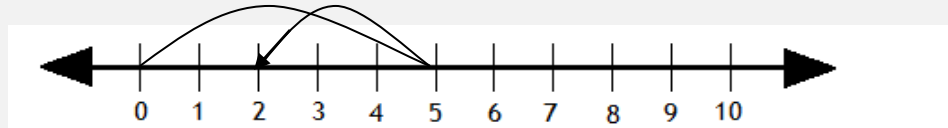


# Subtraction sentences and number lines

## Grade 1 Subtraction Worksheet

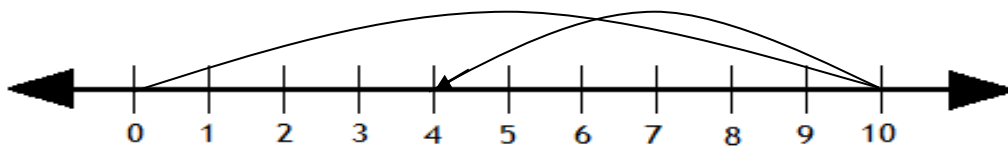
Write the subtraction sentence using the number line.

**Example:**



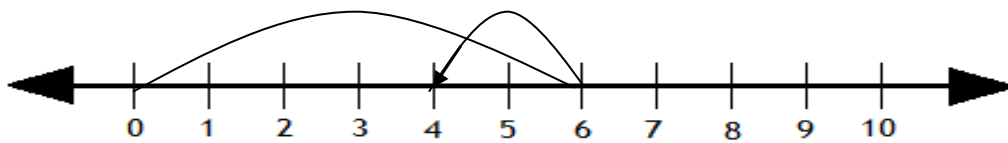
$$\boxed{5} - \boxed{3} = \boxed{2}$$

1.



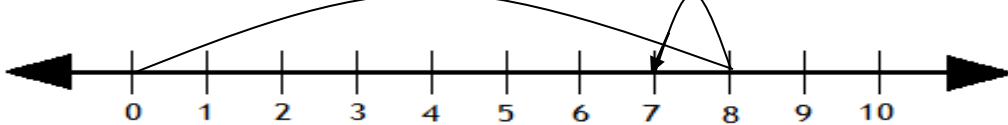
$$\boxed{\phantom{0}} - \boxed{\phantom{0}} = \boxed{\phantom{0}}$$

2.



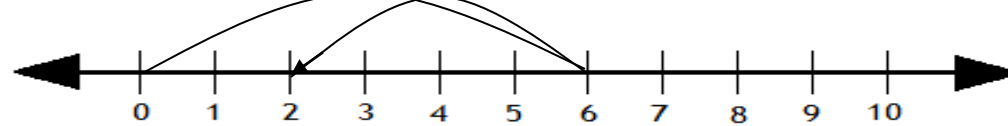
$$\boxed{\phantom{0}} - \boxed{\phantom{0}} = \boxed{\phantom{0}}$$

3.



$$\boxed{\phantom{0}} - \boxed{\phantom{0}} = \boxed{\phantom{0}}$$

4.



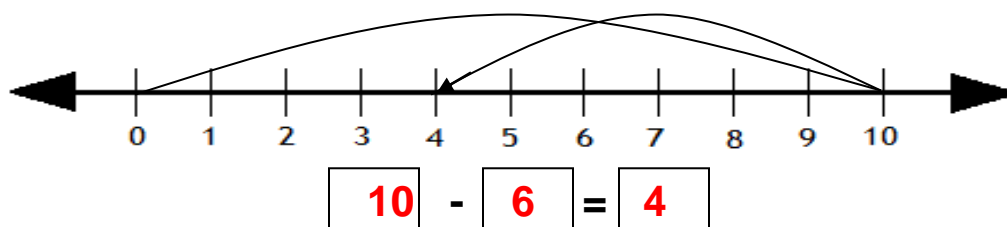
$$\boxed{\phantom{0}} - \boxed{\phantom{0}} = \boxed{\phantom{0}}$$

## Subtraction sentences and number lines

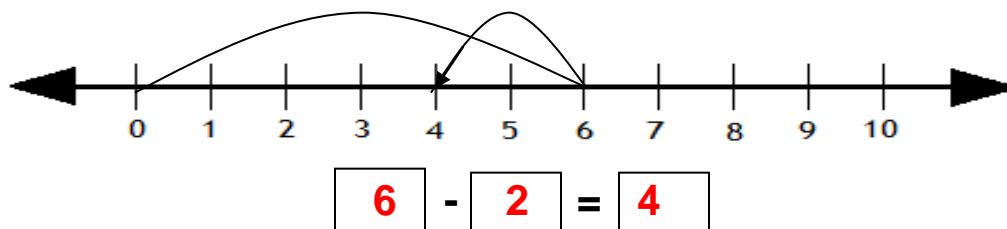
### Grade 1 Subtraction Worksheet

### Answers

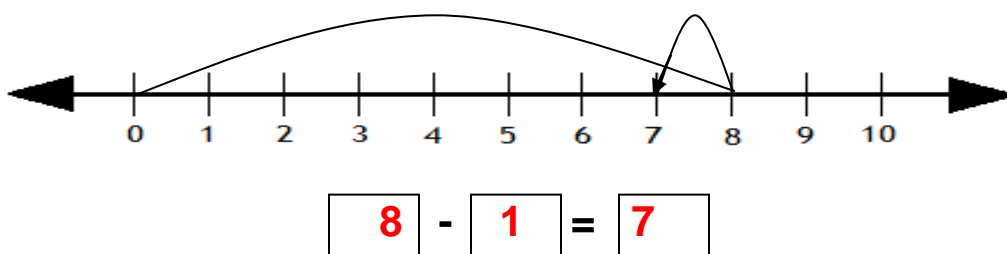
1.



2.



3.



4.

