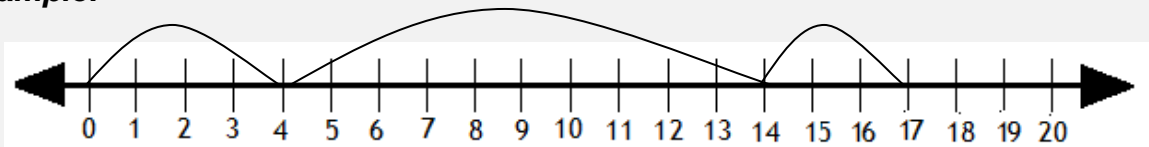


Adding 3 numbers with number lines

Grade 1 Addition Worksheet

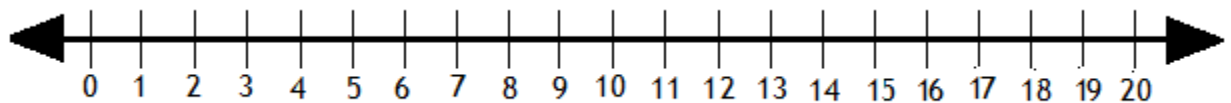
Solve the following by drawing hops on the number line.

Example:



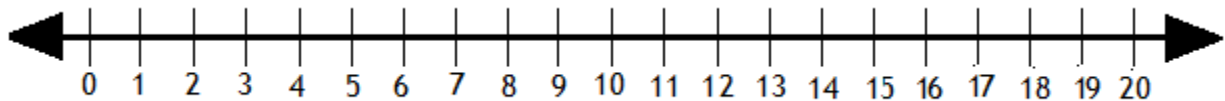
$$4 + 10 + 3 = \boxed{17}$$

1.



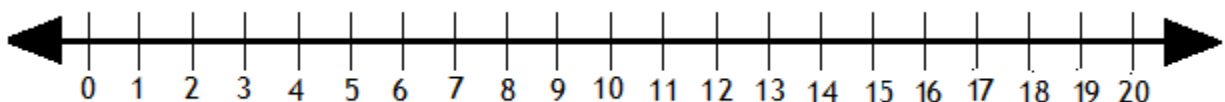
$$3 + 7 + 9 = \boxed{}$$

2.



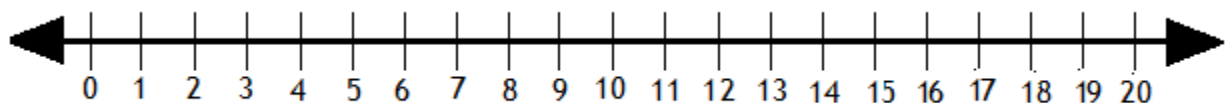
$$12 + 3 + 1 = \boxed{}$$

3.



$$6 + 5 + 6 = \boxed{}$$

4.



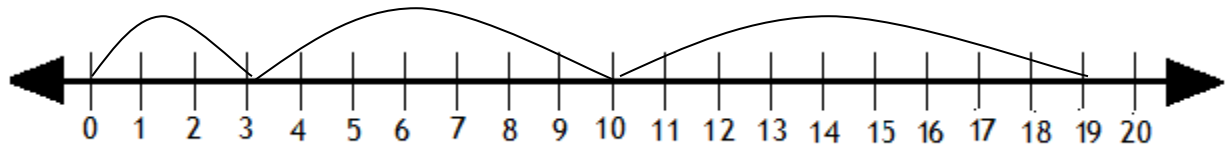
$$11 + 5 + 2 = \boxed{}$$

Adding 3 numbers with number lines

Grade 1 Addition Worksheet

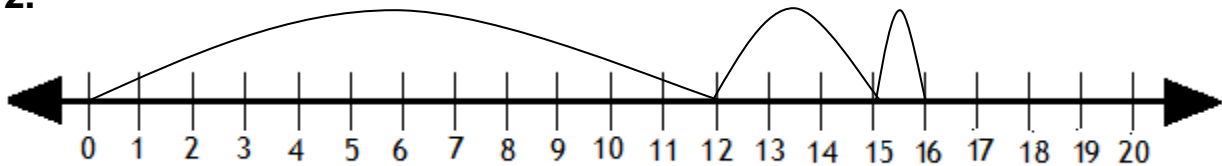
Answers

1.



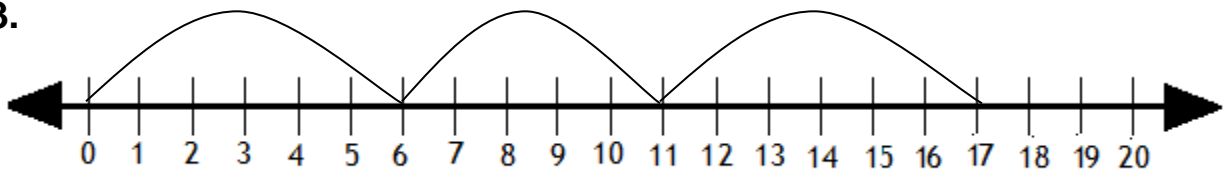
$$3 + 7 + 9 = \boxed{19}$$

2.



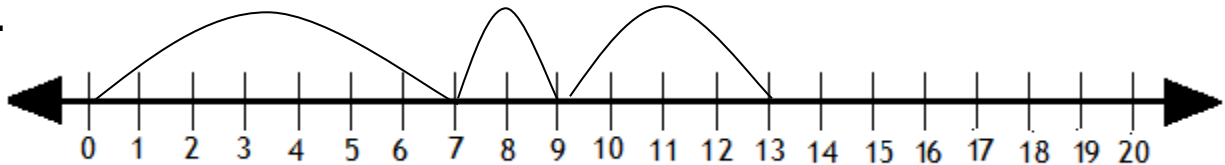
$$12 + 3 + 1 = \boxed{16}$$

3.



$$6 + 5 + 6 = \boxed{17}$$

4.



$$7 + 2 + 4 = \boxed{13}$$