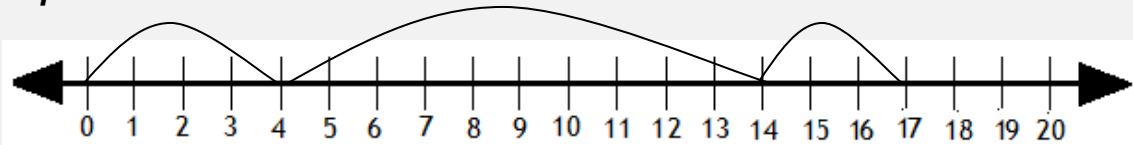


Adding 3 numbers with number lines

Grade 1 Addition Worksheet

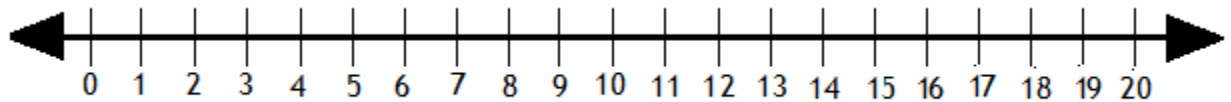
Solve the following by drawing hops on the number line.

Example:



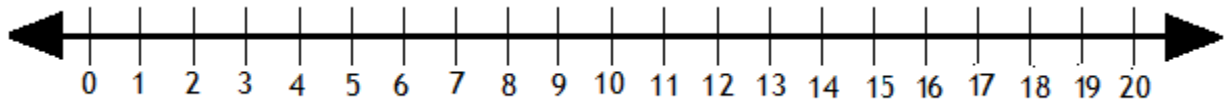
$$4 + 10 + 3 = \boxed{17}$$

1.



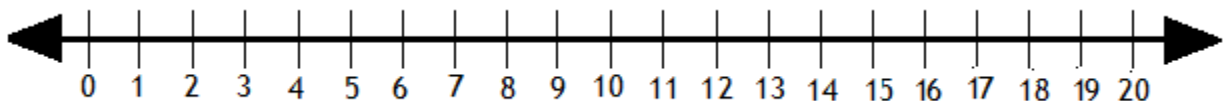
$$6 + 10 + 2 = \boxed{}$$

2.



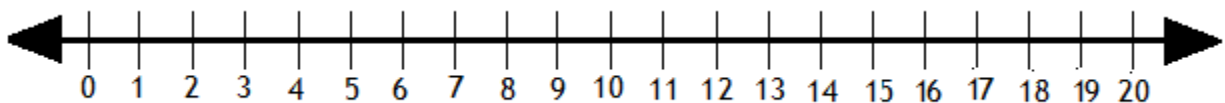
$$3 + 5 + 8 = \boxed{}$$

3.



$$9 + 6 + 5 = \boxed{}$$

4.



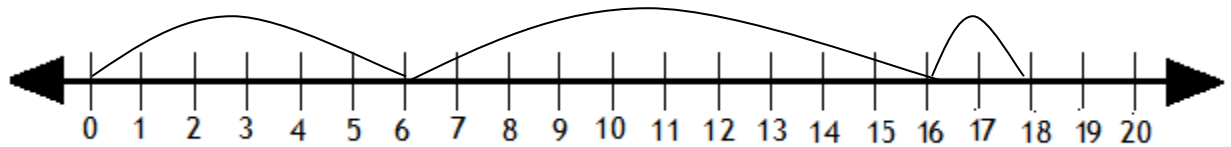
$$11 + 5 + 2 = \boxed{}$$

Adding 3 numbers with number lines

Grade 1 Addition Worksheet

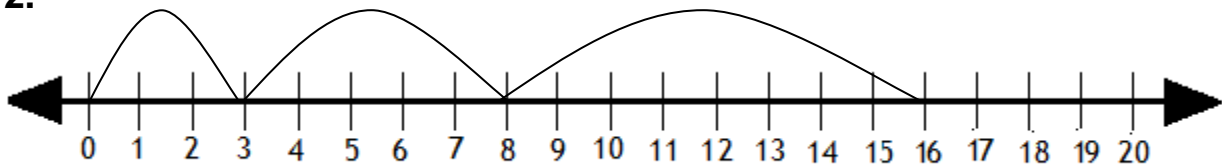
Answers

1.



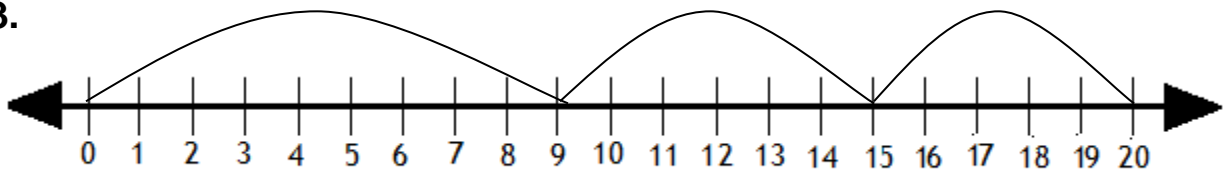
$$6 + 10 + 2 = \boxed{18}$$

2.



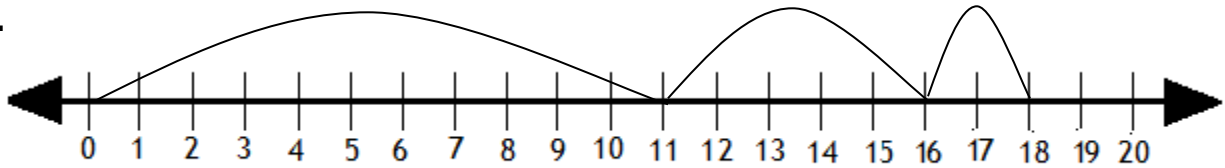
$$3 + 5 + 8 = \boxed{16}$$

3.



$$9 + 6 + 5 = \boxed{20}$$

4.



$$11 + 5 + 2 = \boxed{18}$$