

Addition sentences and number lines

Grade 1 Addition Worksheet

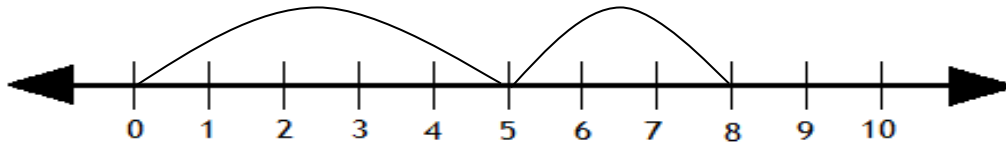
Write the addition sentence using the number line.

Example:



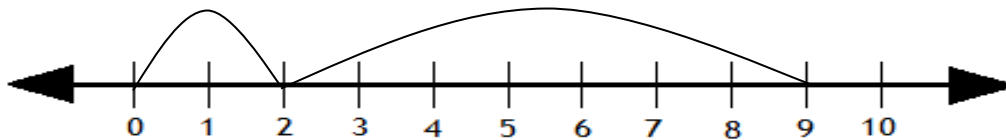
$$\boxed{4} + \boxed{3} = \boxed{7}$$

1.



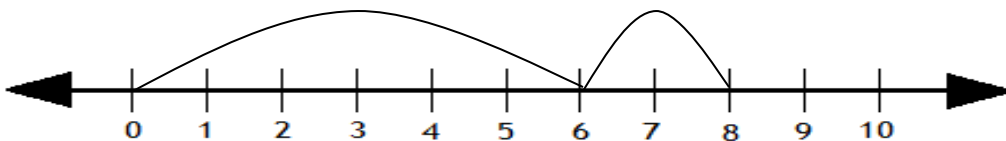
$$\boxed{} + \boxed{} = \boxed{}$$

2.



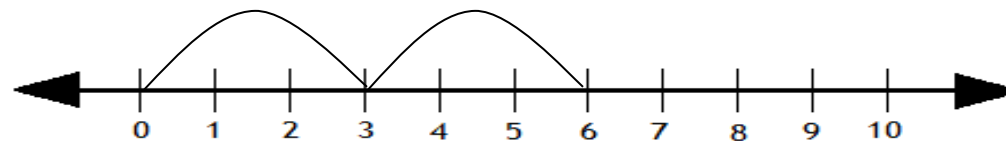
$$\boxed{} + \boxed{} = \boxed{}$$

3.



$$\boxed{} + \boxed{} = \boxed{}$$

4.



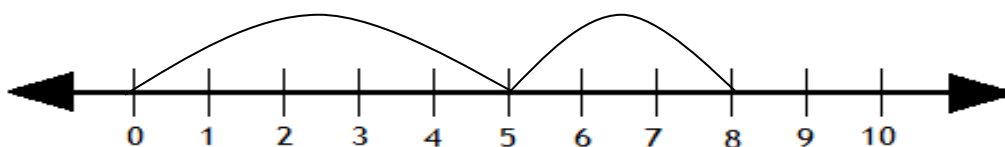
$$\boxed{} + \boxed{} = \boxed{}$$

Addition sentences and number lines

Grade 1 Addition Worksheet

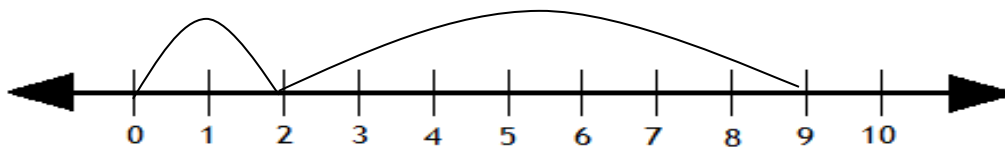
Answers

1.



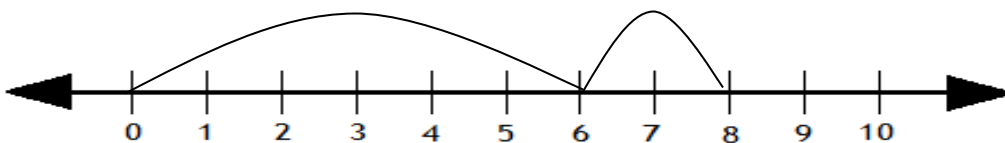
$$\boxed{5} + \boxed{3} = \boxed{8}$$

2.



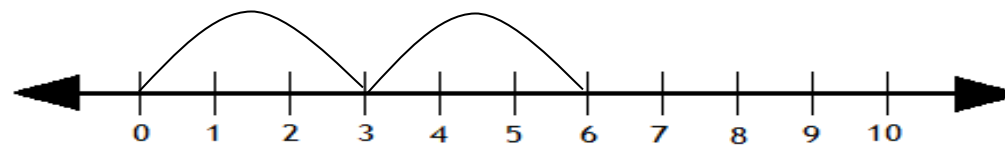
$$\boxed{2} + \boxed{7} = \boxed{9}$$

3.



$$\boxed{6} + \boxed{2} = \boxed{8}$$

4.



$$\boxed{3} + \boxed{3} = \boxed{6}$$