





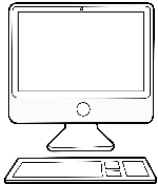

# Comparing the weight of two objects



Grade 1 Measurement Worksheet

Circle the objects that weigh more.

<p>School bus</p> 	<p>Paper clip</p> 
---	---



<p>Book</p> 	<p>Boy</p> 
--	--

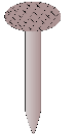

<p>Computer</p> 	<p>Cup</p> 
--	---



<p>Toothbrush</p> 	<p>Toy Train</p> 
---	---

Circle the objects that weigh less.

<p>Car</p> 	<p>CD</p> 
--	---



<p>Mobile Phone</p> 	<p>Clip</p> 
--	---



<p>Nail</p> 	<p>Hammer</p> 
---	---



<p>Sunglasses</p> 	<p>Books</p> 
--	--



Answers

Circle the objects that weigh more.

<p>School bus</p> 	<p>Paper clip</p> 
---	---



<p>Book</p> 	<p>Boy</p> 
--	--



<p>Computer</p> 	<p>Cup</p> 
--	---



<p>Toothbrush</p> 	<p>Toy Train</p> 
---	---

Circle the objects that weigh less.

<p>Car</p> 	<p>CD</p> 
--	---

<p>Mobile Phone</p> 	<p>Clip</p> 
--	---

<p>Nail</p> 	<p>Hammer</p> 
---	---

<p>Sunglasses</p> 	<p>Books</p> 
--	--