

Taller / Shorter

Grade 1 Measurement Worksheet

Look at the pictures. Answer the questions by drawing the correct sized pictures.


Draw a taller one.



Draw a shorter one.




Draw a shorter one.



Draw a taller one.



Draw a taller one.



Draw a shorter one.



Answers


Draw a taller one.



Draw a shorter one.




Draw a shorter one.



Draw a taller one.



Draw a taller one.



Draw a shorter one.

