

# Taller / Shorter

## Grade 1 Measurement Worksheet

Look at the pictures in the boxes. Answer the question by circling the correct picture.

**Which is taller?**



**Which is shorter?**




**Which is shorter?**



**Which is taller?**



**Which is taller?**




**Which is shorter?**



Answers

Which is taller?



Which is shorter?




Which is shorter?



Which is taller?



Which is taller?



Which is shorter?

