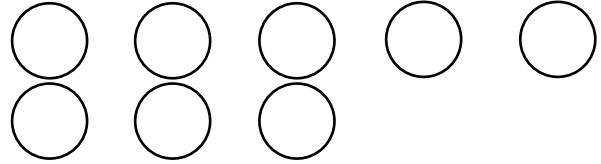


## Addition sentences

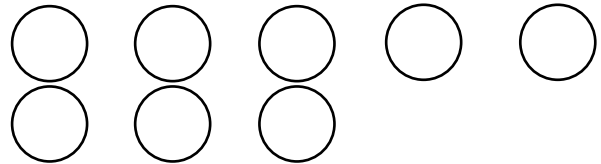
### Grade 1 Addition Worksheet

Find the missing number. Color in circles to help.


$3 + \underline{\quad} = 8$



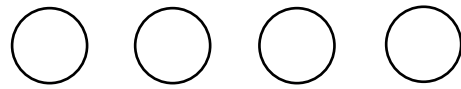
$5 + \underline{\quad} = 8$




$2 + \underline{\quad} = 7$




$3 + \underline{\quad} = 4$



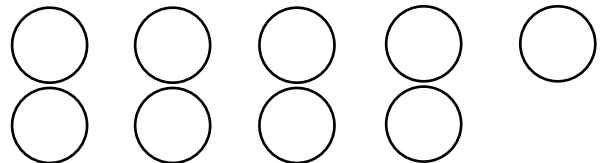
$0 + \underline{\quad} = 5$




$1 + \underline{\quad} = 6$



$2 + \underline{\quad} = 9$

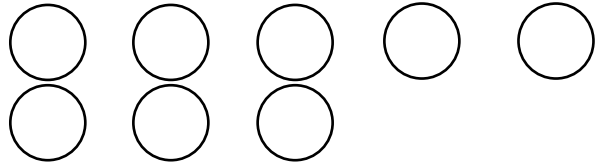


$4 + \underline{\quad} = 6$

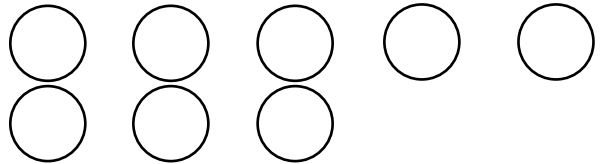


## Answers


$3 + 5 = 8$



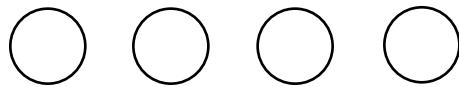
$5 + 3 = 8$




$2 + 5 = 7$



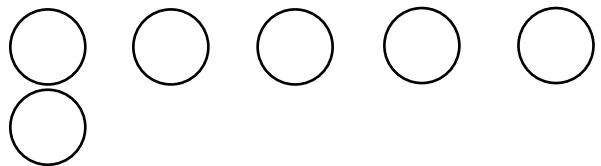
$3 + 1 = 4$



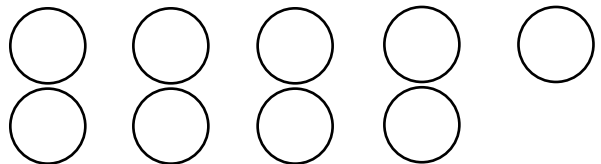
$0 + 5 = 5$



$1 + 5 = 6$



$2 + 7 = 9$



$4 + 2 = 6$

