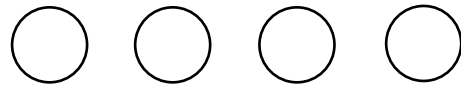


## Addition sentences

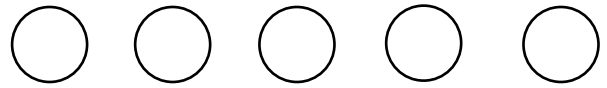
### Grade 1 Addition Worksheet

Find the missing number. Color in circles to help.

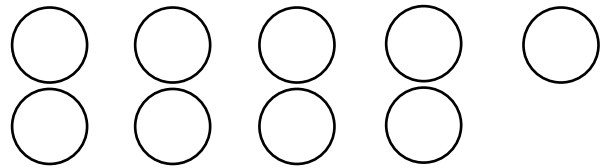
$1 + \underline{\quad} = 4$



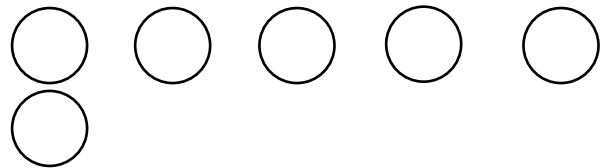
$2 + \underline{\quad} = 5$



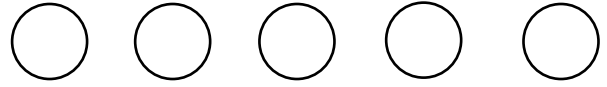
$6 + \underline{\quad} = 9$



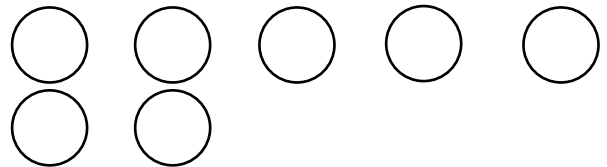
$4 + \underline{\quad} = 6$



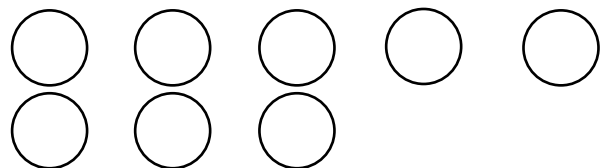
$1 + \underline{\quad} = 5$



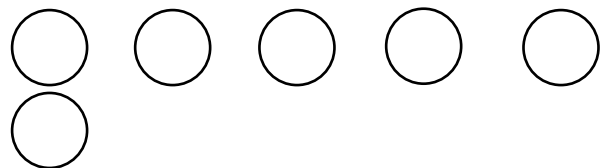
$3 + \underline{\quad} = 7$



$5 + \underline{\quad} = 8$



$2 + \underline{\quad} = 6$



## Answers

$1 + 3 = 4$ 


$2 + 3 = 5$ 


$6 + 3 = 9$ 


$4 + 2 = 6$ 


$1 + 4 = 5$ 


$3 + 4 = 7$ 


$5 + 3 = 8$ 


$2 + 4 = 6$ 
