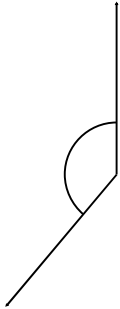


# Classifying angles (acute / obtuse / right)

## Grade 6 Geometry Worksheet


Measure the angle with a protractor. Is it acute, obtuse or a right angle?

1.



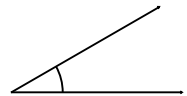
\_\_\_\_\_

2.



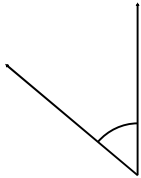
\_\_\_\_\_

3.



\_\_\_\_\_

4.



\_\_\_\_\_

5.



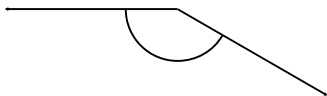
\_\_\_\_\_

6.



\_\_\_\_\_

7.



\_\_\_\_\_

8.



\_\_\_\_\_

9.



\_\_\_\_\_

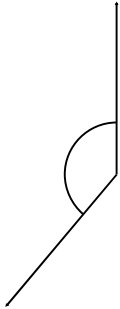
## Classifying angles (acute / obtuse / right)

---

### Grade 6 Geometry Worksheet


Measure the angle with a protractor. Is it acute, obtuse or a right angle?

1.



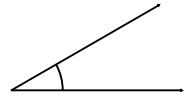
140° Obtuse

2.



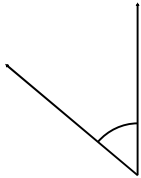
70° Acute

3.



30° Acute

4.



50° Acute

5.



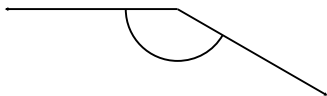
175° Obtuse

6.



155° Obtuse

7.



150° Obtuse

8.



10° Acute

9.



95° Obtuse