

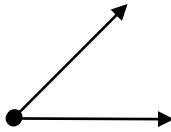
Classifying angles

Grade 5 Geometry Worksheet

Circle the correct classification for the angle or angles shown:

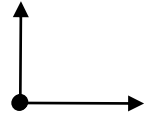
1.

- a. complementary
- b. straight
- c. acute
- d. right



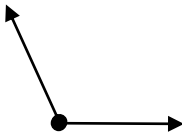
2.

- a. right
- b. straight
- c. acute
- d. complementary



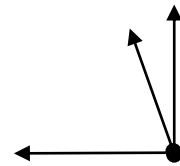
3.

- a. right
- b. supplementary
- c. obtuse
- d. acute



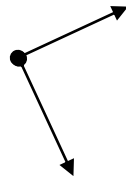
4.

- a. right
- b. complementary
- c. supplementary
- d. obtuse



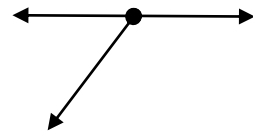
5.

- a. right
- b. straight
- c. acute
- d. complementary



6.

- a. complementary
- b. supplementary
- c. acute
- d. right



7.

- a. straight
- b. obtuse
- c. supplementary
- d. right



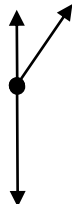
8.

- a. complementary
- b. straight
- c. supplementary
- d. obtuse



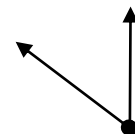
9.

- a. straight
- b. acute
- c. complementary
- d. supplementary



10.

- a. supplementary
- b. obtuse
- c. complementary
- d. acute



Answers

1. c
2. a
3. c
4. b
5. a
6. b
7. a
8. d
9. d
10. d