




Light and dark

Grade 1 Science Worksheet

Which pictures have the most light?

Write 1 - 4 beside the pictures, with 1 being for the picture with the most light.



One picture has no light.

Can we see anything? (Yes / No)

What do we need to see? _____

Answers



1



4



3



2

One picture has no light.

Can we see anything? (Yes / No)

What do we need to see? Light.