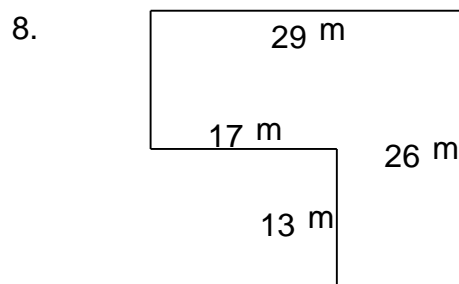
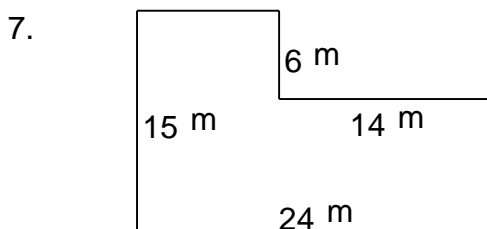
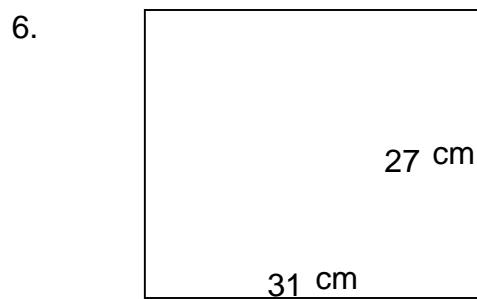
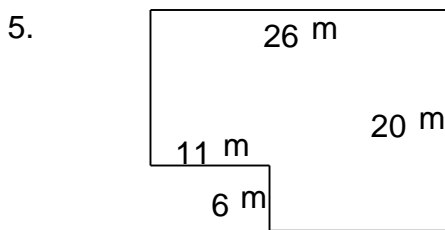
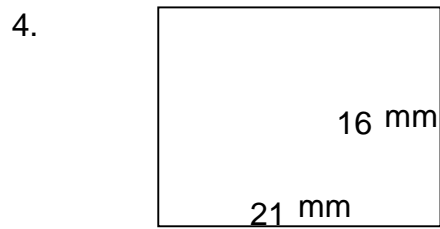
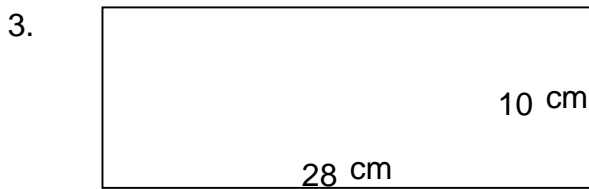
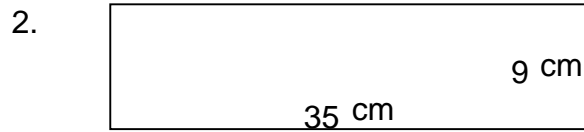
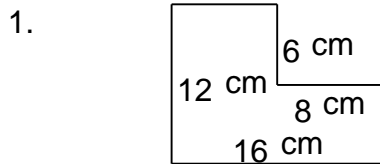


## Rectangular shapes - area and perimeter

---

### Grade 5 Geometry Worksheet

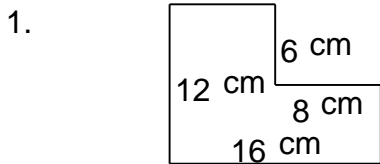
Find the perimeter and area of each rectangular shape.



# Rectangular shapes - area and perimeter

## Grade 5 Geometry Worksheet

Find the perimeter and area of each rectangular shape.



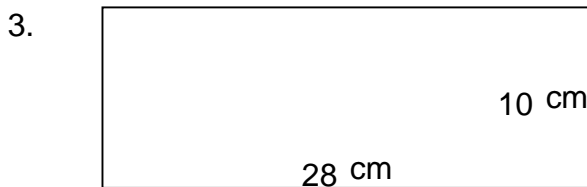
---

$P = 56 \text{ cm}$     $A = 144 \text{ cm}^2$



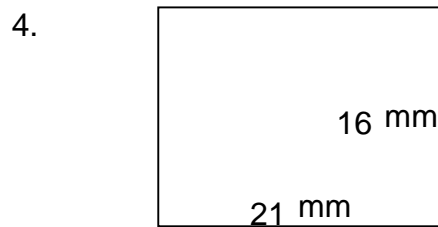
---

$P = 88 \text{ cm}$     $A = 315 \text{ cm}^2$



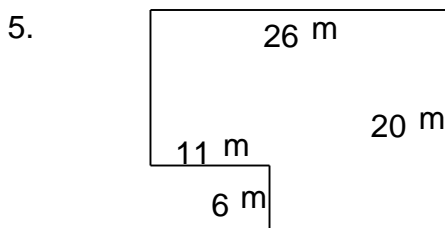
---

$P = 76 \text{ cm}$     $A = 280 \text{ cm}^2$



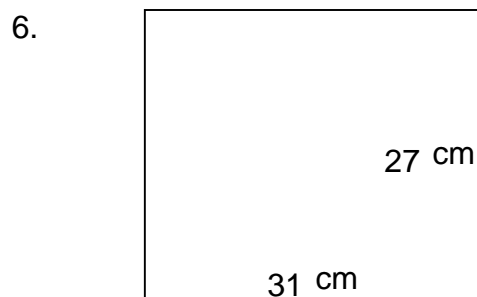
---

$P = 74 \text{ mm}$     $A = 336 \text{ mm}^2$



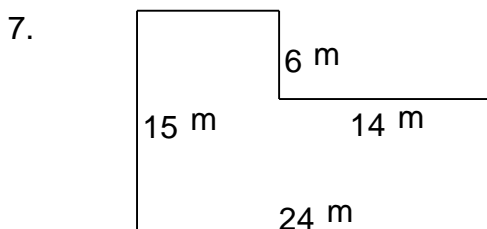
---

$P = 92 \text{ m}$     $A = 454 \text{ m}^2$



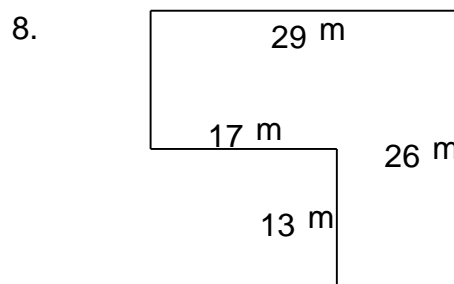
---

$P = 116 \text{ cm}$     $A = 837 \text{ cm}^2$



---

$P = 78 \text{ m}$     $A = 276 \text{ m}^2$



---

$P = 110 \text{ m}$     $A = 533 \text{ m}^2$