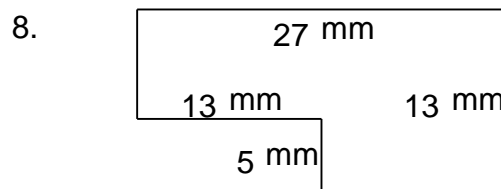
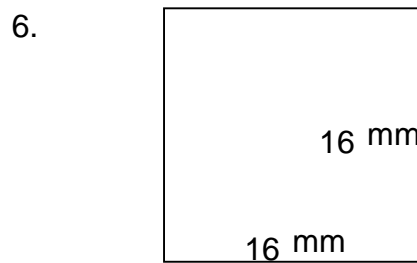
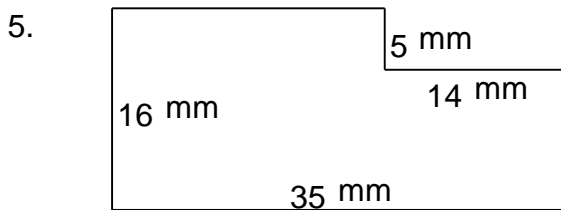
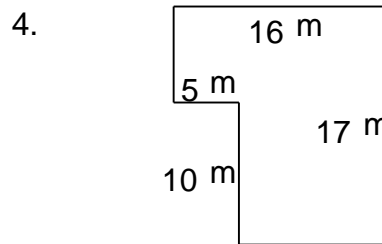
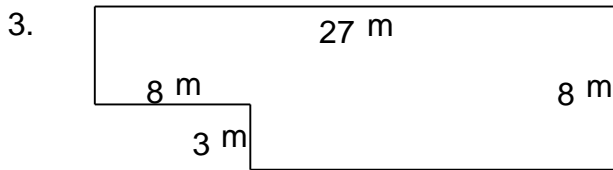
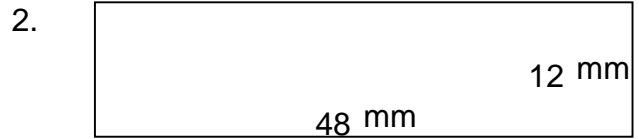
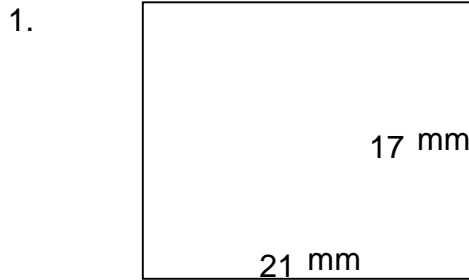


Rectangular shapes - area and perimeter

Grade 5 Geometry Worksheet

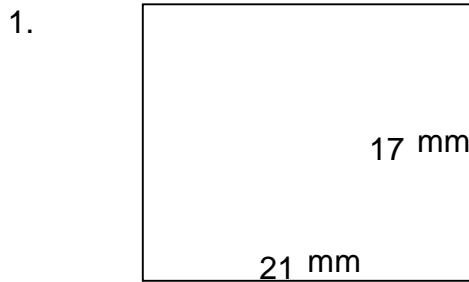
Find the perimeter and area of each rectangular shape.



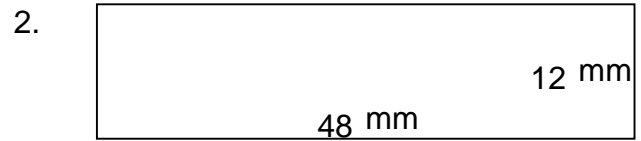
Rectangular shapes - area and perimeter

Grade 5 Geometry Worksheet

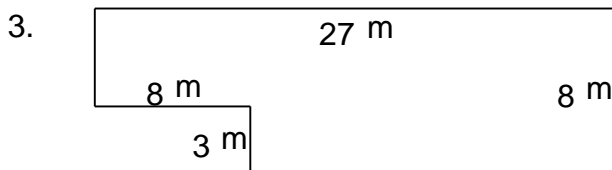
Find the perimeter and area of each rectangular shape.



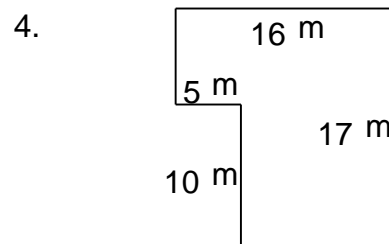
$P = 76 \text{ mm}$ $A = 357 \text{ mm}^2$



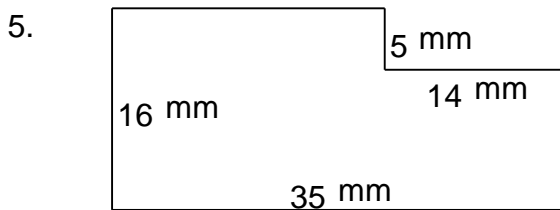
$P = 120 \text{ mm}$ $A = 576 \text{ mm}^2$



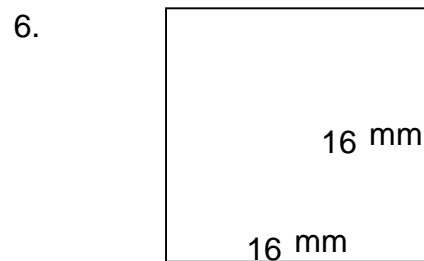
$P = 70 \text{ m}$ $A = 192 \text{ m}^2$




$P = 66 \text{ m}$ $A = 222 \text{ m}^2$



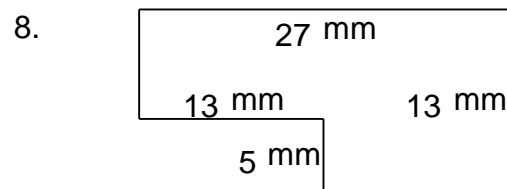
$P = 102 \text{ mm}$ $A = 490 \text{ mm}^2$



$P = 64 \text{ mm}$ $A = 256 \text{ mm}^2$



$P = 64 \text{ cm}$ $A = 175 \text{ cm}^2$



$P = 80 \text{ mm}$ $A = 286 \text{ mm}^2$