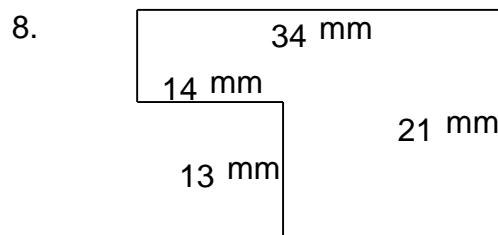
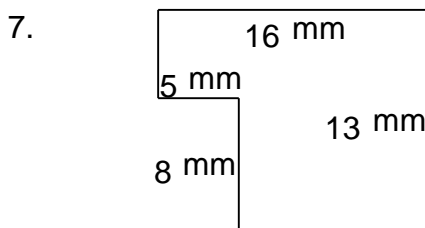
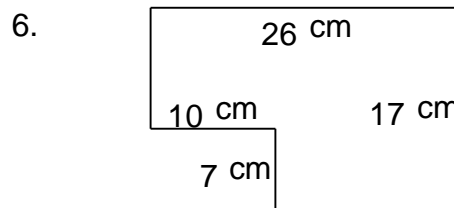
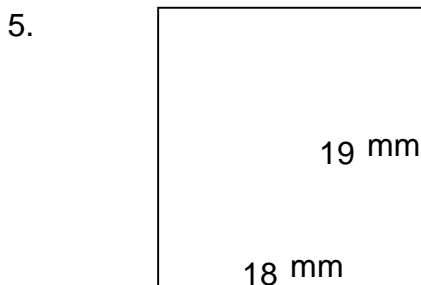
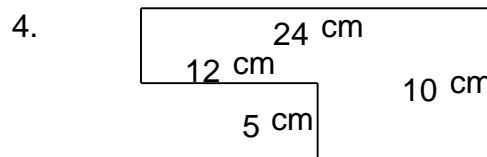

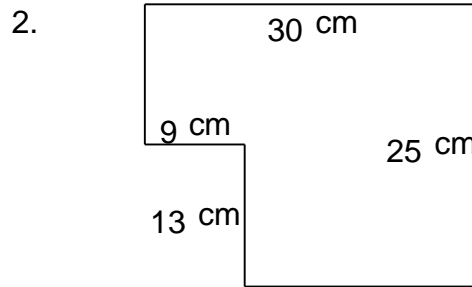
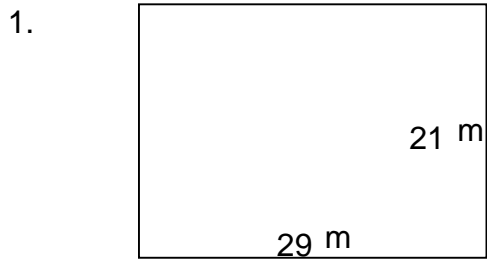


Rectangular shapes - area and perimeter

Grade 5 Geometry Worksheet

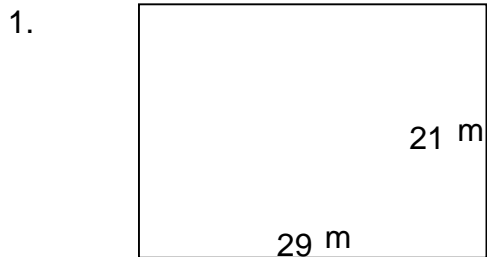
Find the perimeter and area of each rectangular shape.



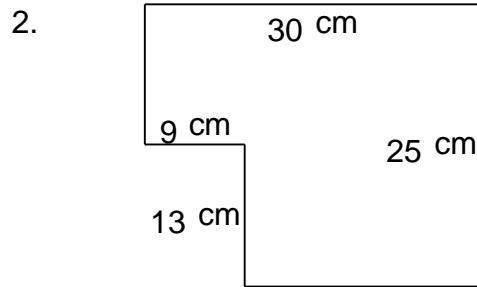
Rectangular shapes - area and perimeter

Grade 5 Geometry Worksheet


Find the perimeter and area of each rectangular shape.



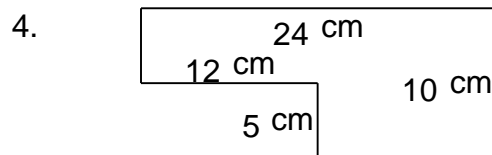
$P = 100 \text{ m}$ $A = 609 \text{ m}^2$



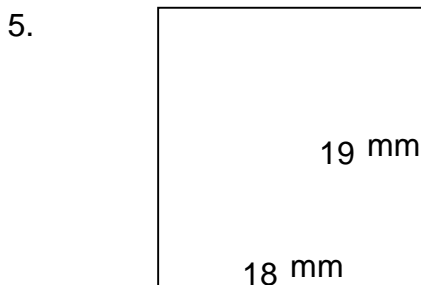
$P = 110 \text{ cm}$ $A = 633 \text{ cm}^2$



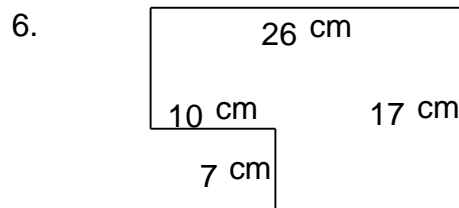
$P = 88 \text{ cm}$ $A = 266 \text{ cm}^2$



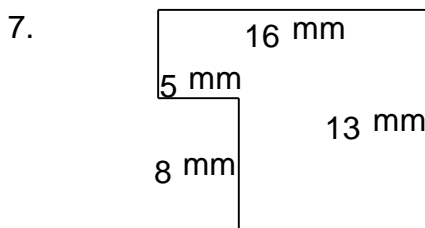
$P = 68 \text{ cm}$ $A = 180 \text{ cm}^2$



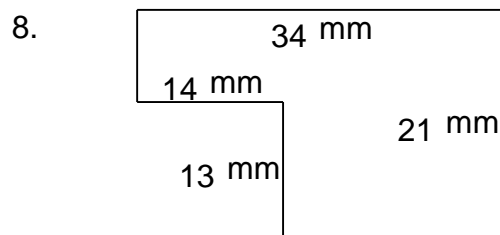
$P = 74 \text{ mm}$ $A = 342 \text{ mm}^2$



$P = 86 \text{ cm}$ $A = 372 \text{ cm}^2$



$P = 58 \text{ mm}$ $A = 168 \text{ mm}^2$



$P = 110 \text{ mm}$ $A = 532 \text{ mm}^2$