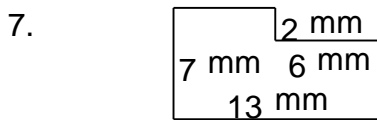
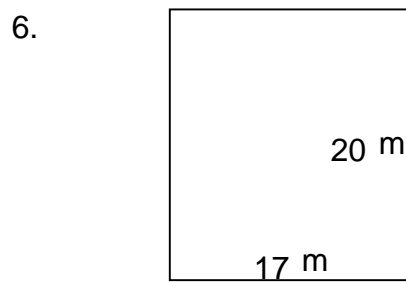
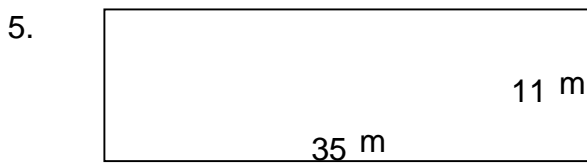
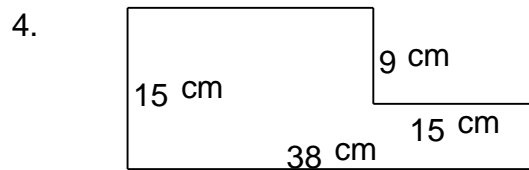
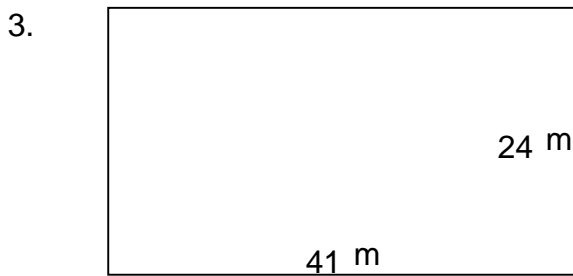
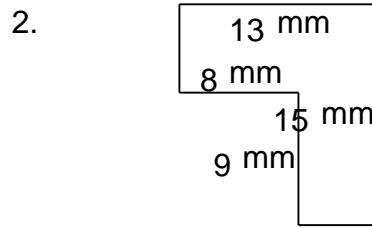
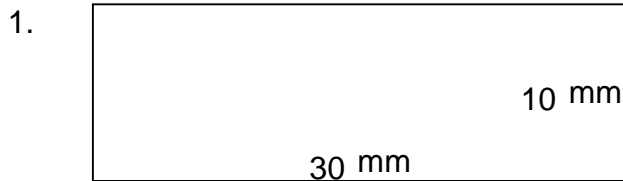


Rectangular shapes - area and perimeter

Grade 5 Geometry Worksheet

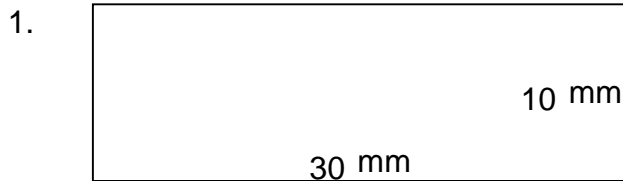
Find the perimeter and area of each rectangular shape.



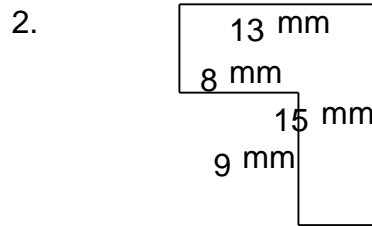
Rectangular shapes - area and perimeter

Grade 5 Geometry Worksheet

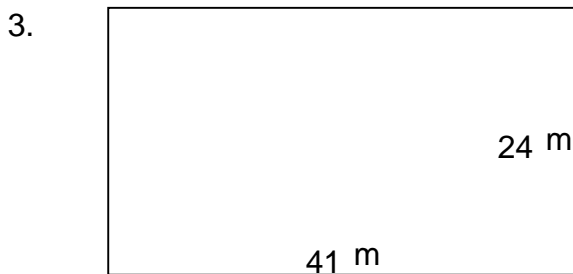
Find the perimeter and area of each rectangular shape.



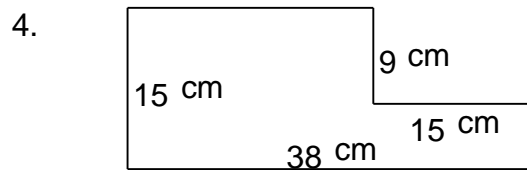
$P = 80 \text{ mm}$ $A = 300 \text{ mm}^2$



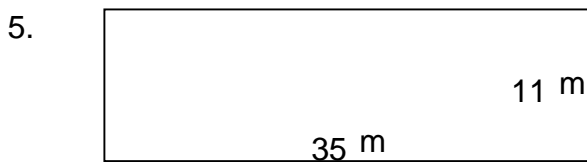
$P = 56 \text{ mm}$ $A = 123 \text{ mm}^2$



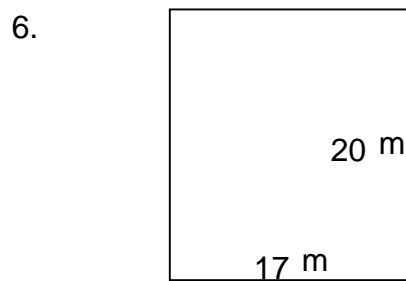
$P = 130 \text{ m}$ $A = 984 \text{ m}^2$



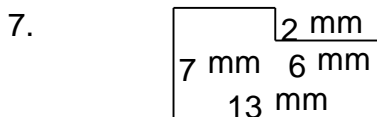
$P = 106 \text{ cm}$ $A = 435 \text{ cm}^2$



$P = 92 \text{ m}$ $A = 385 \text{ m}^2$



$P = 74 \text{ m}$ $A = 340 \text{ m}^2$



$P = 40 \text{ mm}$ $A = 79 \text{ mm}^2$



$P = 76 \text{ m}$ $A = 214 \text{ m}^2$