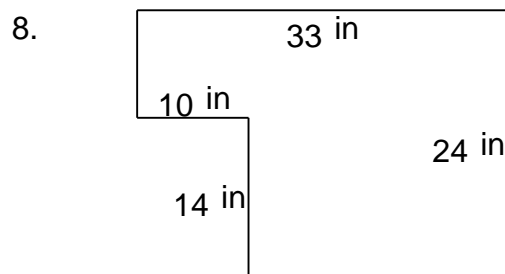
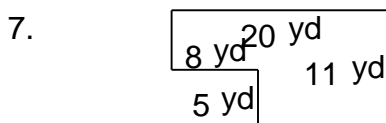
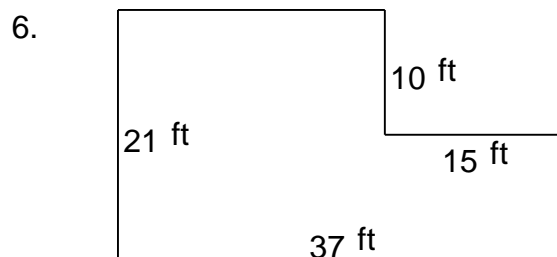
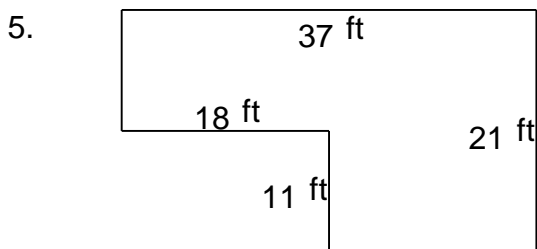
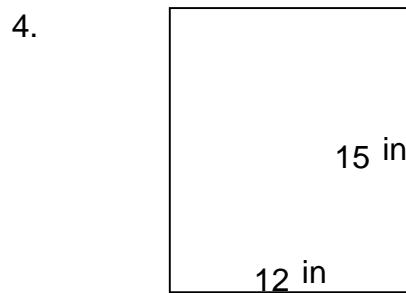
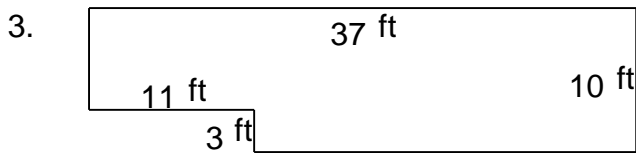
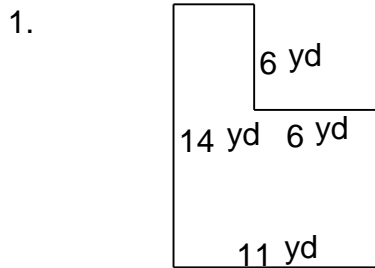


# Rectangular shapes - area and perimeter

## Grade 5 Geometry Worksheet

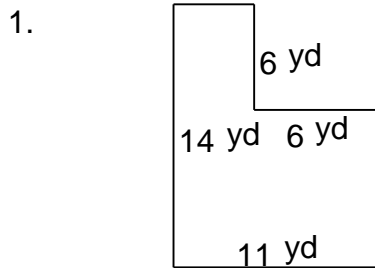
Find the perimeter and area of each rectangular shape.



# Rectangular shapes - area and perimeter

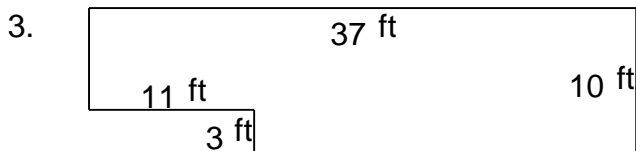
## Grade 5 Geometry Worksheet

Find the perimeter and area of each rectangular shape.



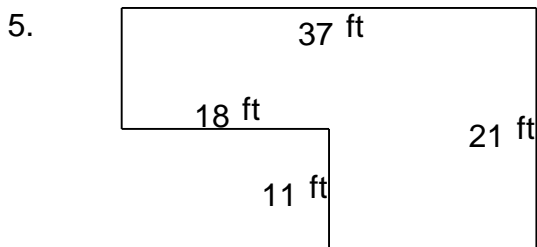
---

$P = 50 \text{ yd}$   $A = 118 \text{ yd}^2$



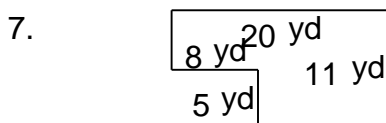
---

$P = 94 \text{ ft}$   $A = 337 \text{ ft}^2$




---

$P = 116 \text{ ft}$   $A = 579 \text{ ft}^2$



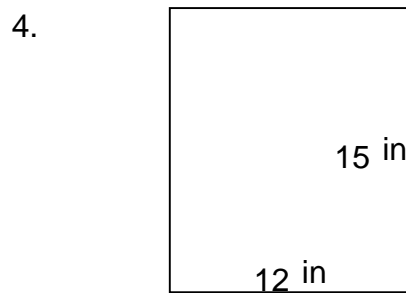
---

$P = 62 \text{ yd}$   $A = 180 \text{ yd}^2$



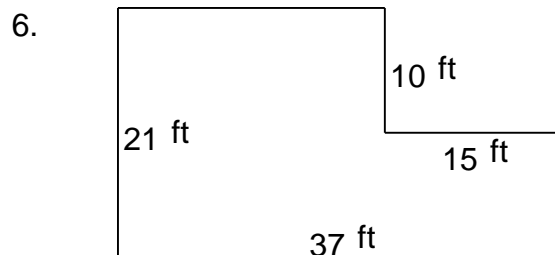
---

$P = 106 \text{ in}$   $A = 480 \text{ in}^2$



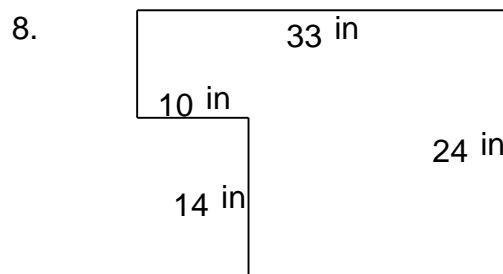
---

$P = 54 \text{ in}$   $A = 180 \text{ in}^2$



---

$P = 116 \text{ ft}$   $A = 627 \text{ ft}^2$



---

$P = 114 \text{ in}$   $A = 652 \text{ in}^2$