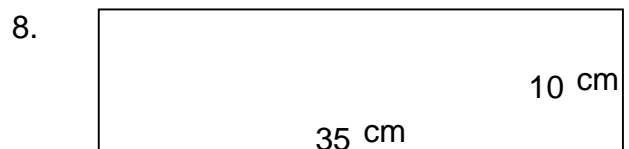
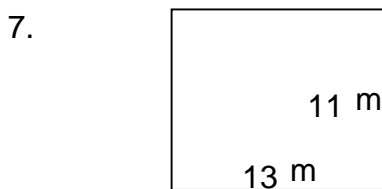
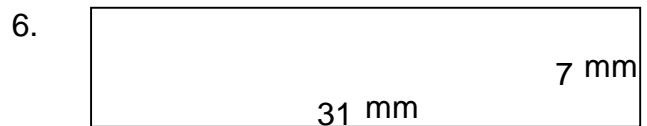
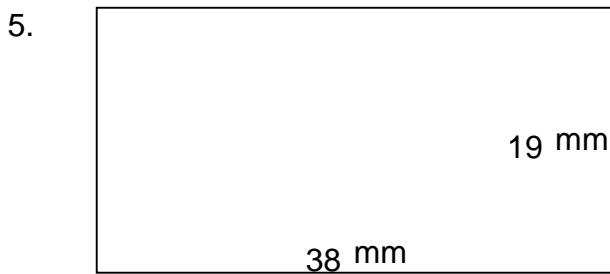

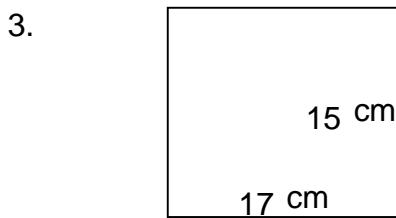
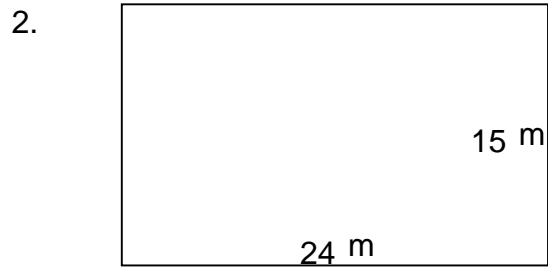
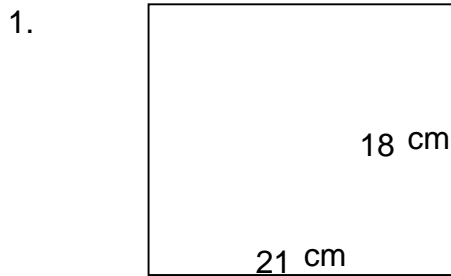


Rectangles - area and perimeter (metric)

Grade 5 Geometry Worksheet

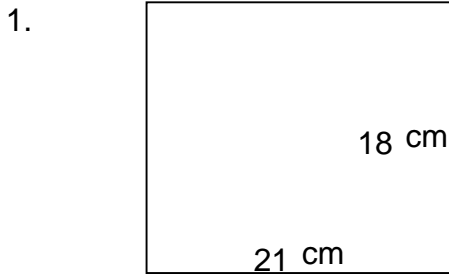
Find the perimeter and area of each rectangle.



Rectangles - area and perimeter (metric)

Grade 5 Geometry Worksheet

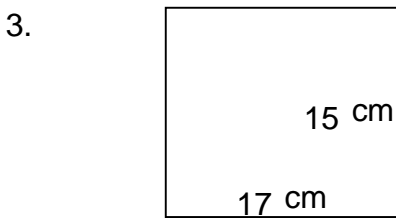
Find the perimeter and area of each rectangle.




$$P = 78 \text{ cm} \quad A = 378 \text{ cm}^2$$



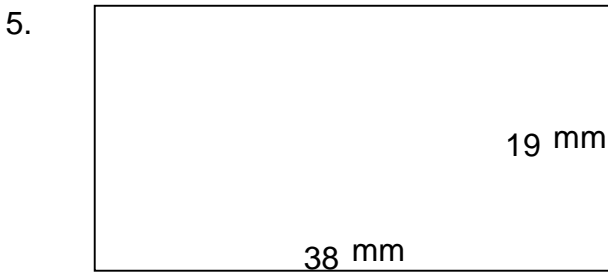
$$P = 78 \text{ m} \quad A = 360 \text{ m}^2$$




$$P = 64 \text{ cm} \quad A = 255 \text{ cm}^2$$



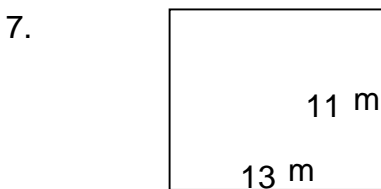
$$P = 76 \text{ mm} \quad A = 280 \text{ mm}^2$$



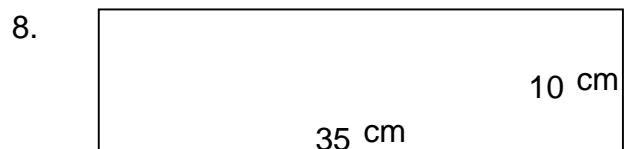
$$P = 114 \text{ mm} \quad A = 722 \text{ mm}^2$$



$$P = 76 \text{ mm} \quad A = 217 \text{ mm}^2$$



$$P = 48 \text{ m} \quad A = 143 \text{ m}^2$$



$$P = 90 \text{ cm} \quad A = 350 \text{ cm}^2$$