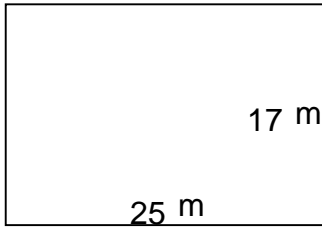


Rectangles - area and perimeter (metric)

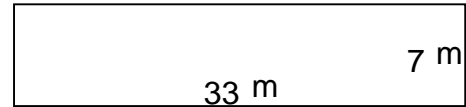
Grade 5 Geometry Worksheet

Find the perimeter and area of each rectangle.

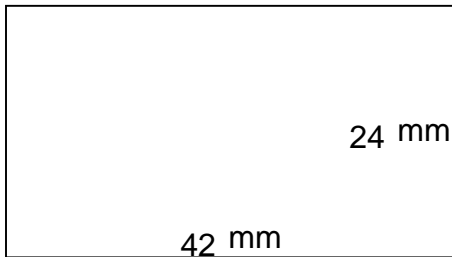
1.



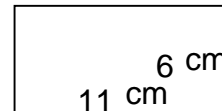
2.



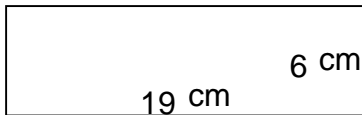
3.



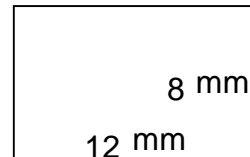
4.



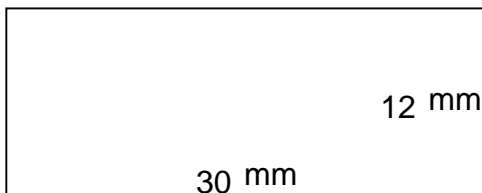
5.



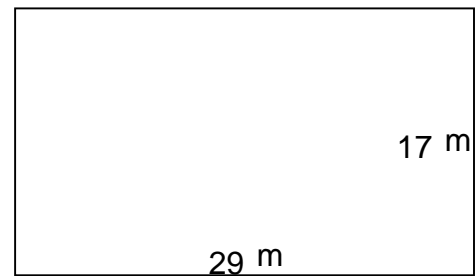
6.



7.



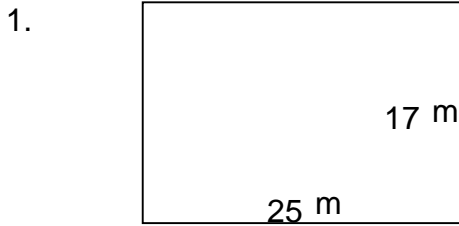
8.



Rectangles - area and perimeter (metric)

Grade 5 Geometry Worksheet

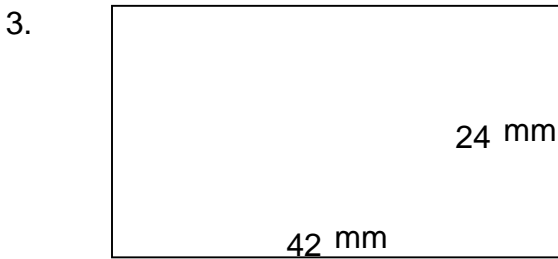
Find the perimeter and area of each rectangle.



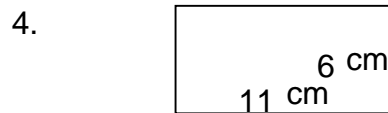
$$P = 84 \text{ m} \quad A = 425 \text{ m}^2$$




$$P = 80 \text{ m} \quad A = 231 \text{ m}^2$$



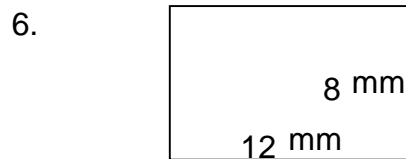
$$P = 132 \text{ mm} \quad A = 1,008 \text{ mm}^2$$



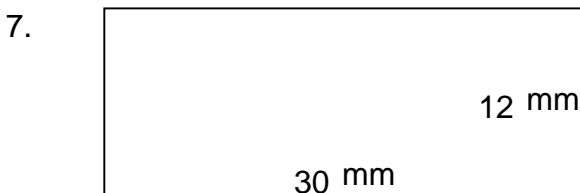
$$P = 34 \text{ cm} \quad A = 66 \text{ cm}^2$$



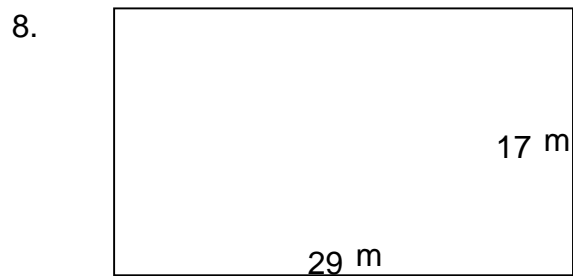
$$P = 50 \text{ cm} \quad A = 114 \text{ cm}^2$$



$$P = 40 \text{ mm} \quad A = 96 \text{ mm}^2$$



$$P = 84 \text{ mm} \quad A = 360 \text{ mm}^2$$



$$P = 92 \text{ m} \quad A = 493 \text{ m}^2$$