

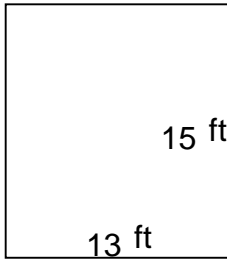
# Rectangles - area and perimeter

---

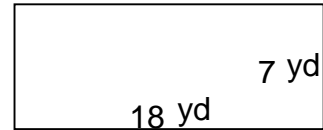
## Grade 5 Geometry Worksheet

Find the perimeter and area of each rectangle.

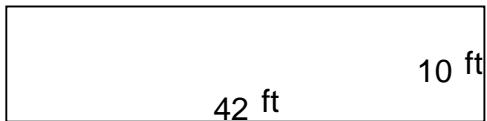
1.



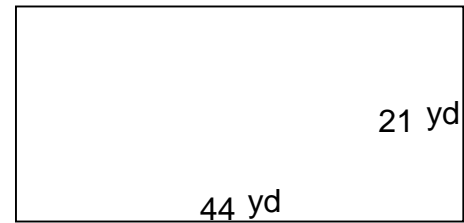
2.



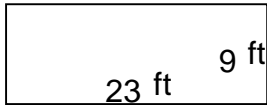
3.



4.



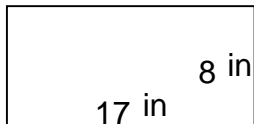
5.



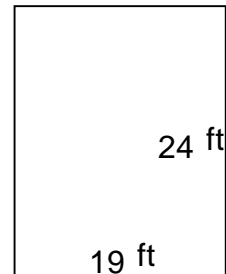
6.



7.



8.



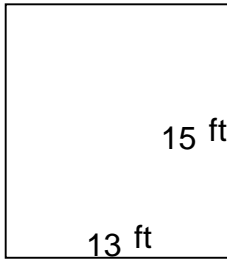
## Rectangles - area and perimeter

---

### Grade 5 Geometry Worksheet

Find the perimeter and area of each rectangle.

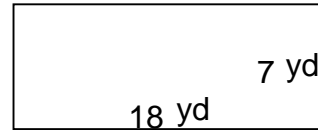
1.



---

$$P = 56 \text{ ft} \quad A = 195 \text{ ft}^2$$

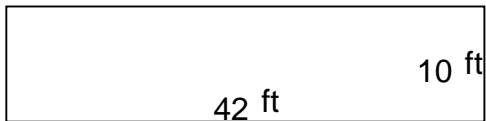
2.



---

$$P = 50 \text{ yd} \quad A = 126 \text{ yd}^2$$

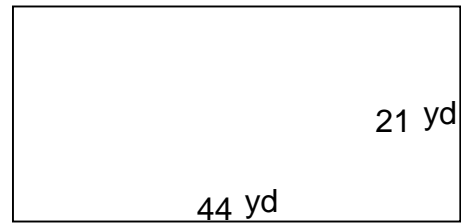
3.



---

$$P = 104 \text{ ft} \quad A = 420 \text{ ft}^2$$

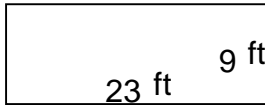
4.



---

$$P = 130 \text{ yd} \quad A = 924 \text{ yd}^2$$

5.



---

$$P = 64 \text{ ft} \quad A = 207 \text{ ft}^2$$

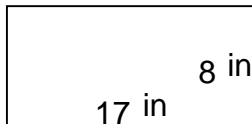
6.



---

$$P = 72 \text{ in} \quad A = 275 \text{ in}^2$$


7.



---

$$P = 50 \text{ in} \quad A = 136 \text{ in}^2$$

8.



---

$$P = 86 \text{ ft} \quad A = 456 \text{ ft}^2$$