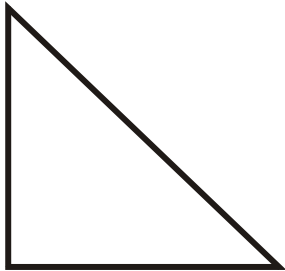


Classifying triangles (equilateral / isosceles / scalene / right)

Grade 5 Geometry Worksheet

Classify the triangles.


1.



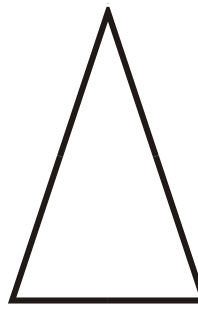
2.




3.



4.



5.



6.

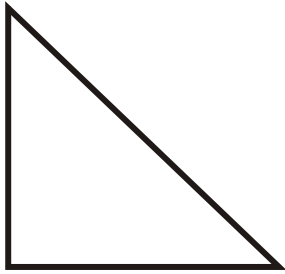


Classifying triangles (equilateral / isosceles / scalene / right)

Grade 5 Geometry Worksheet

Classify the triangles.

1.




Right Triangle

2.




Scalene Triangle

3.



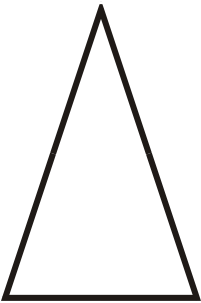
Equilateral Triangle

4.



Isosceles Triangle

5.



Isosceles Triangle

6.



Scalene Triangle
