

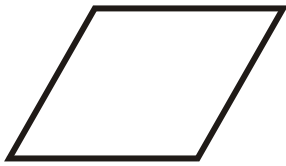
# Classifying quadrilaterals (square / rectangle / rhombus / parallelogram / trapezoid / scalene (irregular))

---

## Grade 5 Geometry Worksheet


Classify the quadrilaterals.

1.



\_\_\_\_\_

2.



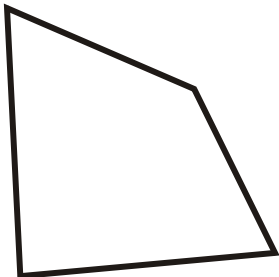
\_\_\_\_\_

3.



\_\_\_\_\_

4.



\_\_\_\_\_

5.



\_\_\_\_\_

6.



\_\_\_\_\_

7.



\_\_\_\_\_

8.



\_\_\_\_\_

9.



\_\_\_\_\_

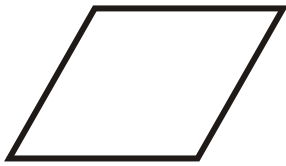
# Classifying quadrilaterals (square / rectangle / rhombus / parallelogram / trapezoid / scalene (irregular))

---

## Grade 5 Geometry Worksheet

Classify the quadrilaterals.


1.



Rhombus

---

2.



Square

---

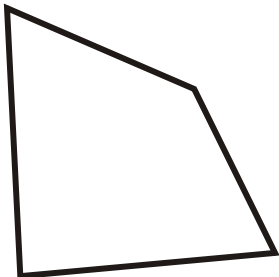
3.



Rectangle

---

4.



Irregular Quadrilateral

---

5.



Parallelogram

---

6.



Trapezoid

---

7.



Rhombus

---

8.



Rectangle

---

9.



Rhombus

---