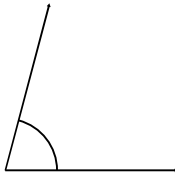


Measure and classify angles

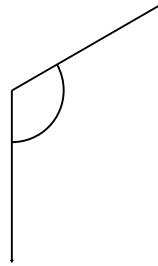
Grade 5 Geometry Worksheet

Measure the angle with a protractor. Is it acute, obtuse or a right angle?

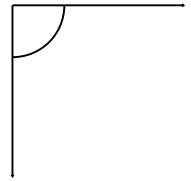
1.



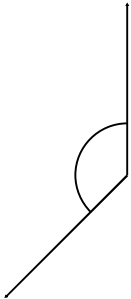
2.



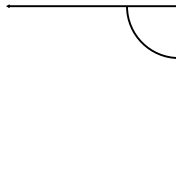
3.



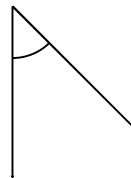
4.



5.



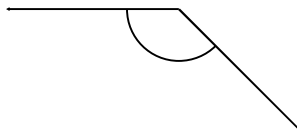
6.



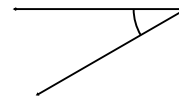
7.



8.



9.

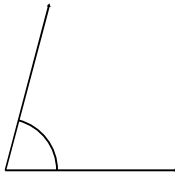


Measure and classify angles

Grade 5 Geometry Worksheet

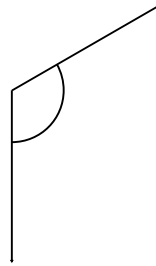
Measure the angle with a protractor. Is it acute, obtuse or a right angle?

1.



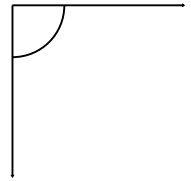
75° Acute

2.



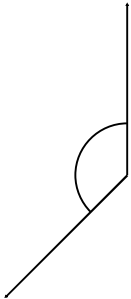
120° Obtuse

3.



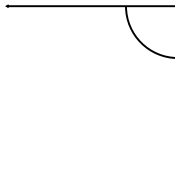
90° Right

4.



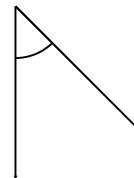
135° Obtuse

5.



90° Right

6.



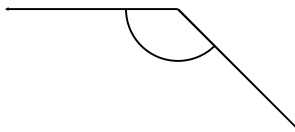
45° Acute

7.



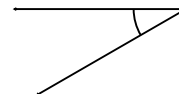
165° Obtuse

8.



135° Obtuse

9.



30° Acute