

Measure and classify angles

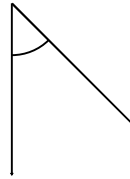
Grade 5 Geometry Worksheet

Measure the angle with a protractor. Is it acute, obtuse or a right angle?

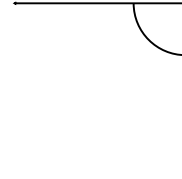
1.



2.



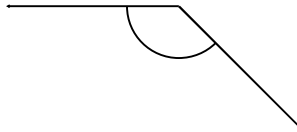
3.



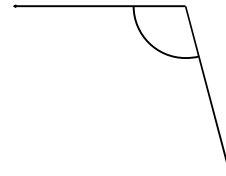
4.



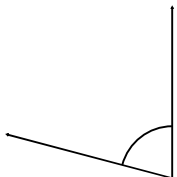
5.




6.



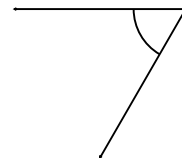
7.



8.



9.



Measure and classify angles

Grade 5 Geometry Worksheet

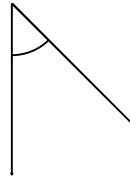
Measure the angle with a protractor. Is it acute, obtuse or a right angle?

1.



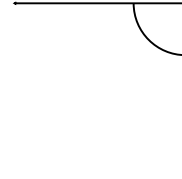
15° Acute

2.



45° Acute

3.



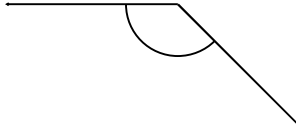
90° Right

4.



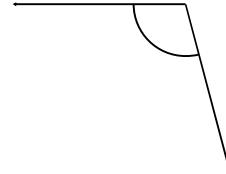
15° Acute

5.



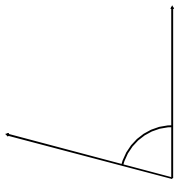
135° Obtuse

6.




105° Obtuse

7.



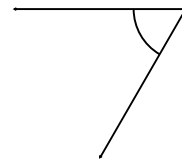
75° Acute

8.



15° Acute

9.



60° Acute