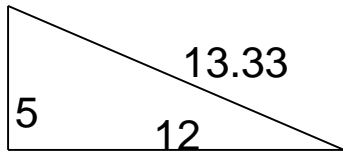


Area of Right Triangles

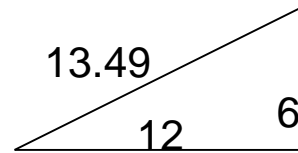
Grade 5 Geometry Worksheet

Find the area.

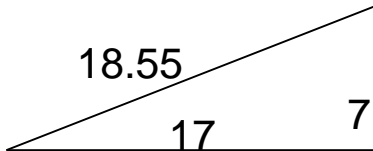
1.



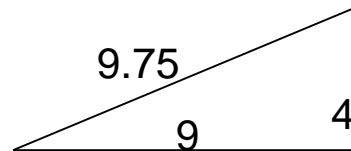
4.



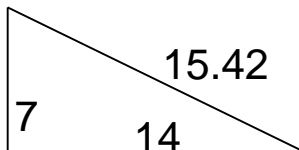
2.



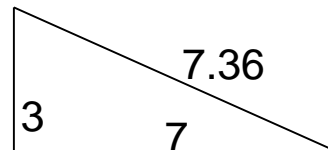
5.



3.



6.

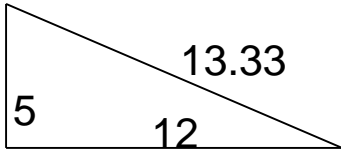


Area of Right Triangles

Grade 5 Geometry Worksheet

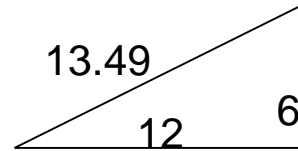
Find the area.

1.



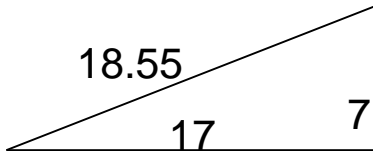
$A = 30$

4.



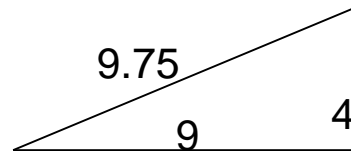
$A = 36$

2.



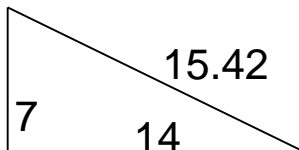
$A = 59.5$

5.



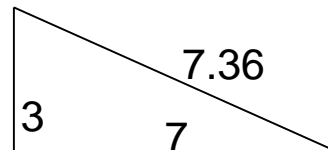
$A = 18$

3.



$A = 49$

6.



$A = 10.5$
