




Lines of symmetry

Grade 4 Geometry Worksheet

If a shape below has lines of symmetry, draw them. If a shape does not have any lines of symmetry, draw an X through it.



Answers

