

















Angles of rotational symmetry

Grade 4 Geometry Worksheet

At which angles do these shapes demonstrate rotational symmetry? (You might need to check more than one box for each question)

 <p> <input type="checkbox"/> 90° <input type="checkbox"/> 180° <input type="checkbox"/> 270° <input type="checkbox"/> none </p>	 <p> <input type="checkbox"/> 90° <input type="checkbox"/> 120° <input type="checkbox"/> 180° <input type="checkbox"/> none </p>
 <p> <input type="checkbox"/> 180° <input type="checkbox"/> 270° <input type="checkbox"/> 45° <input type="checkbox"/> none </p>	 <p> <input type="checkbox"/> 45° <input type="checkbox"/> 90° <input type="checkbox"/> 270° <input type="checkbox"/> none </p>
 <p> <input type="checkbox"/> 90° <input type="checkbox"/> 180° <input type="checkbox"/> 270° <input type="checkbox"/> none </p>	 <p> <input type="checkbox"/> 45° <input type="checkbox"/> 240° <input type="checkbox"/> 180° <input type="checkbox"/> 300° </p>
 <p> <input type="checkbox"/> 90° <input type="checkbox"/> 180° <input type="checkbox"/> 270° <input type="checkbox"/> none </p>	 <p> <input type="checkbox"/> 45° <input type="checkbox"/> 90° <input type="checkbox"/> 135° <input type="checkbox"/> 235° </p>

Answers

 <p> <input type="checkbox"/> 90° <input checked="" type="checkbox"/> 180° <input type="checkbox"/> 270° <input type="checkbox"/> none </p>	 <p> <input type="checkbox"/> 90° <input type="checkbox"/> 120° <input type="checkbox"/> 180° <input checked="" type="checkbox"/> none </p>
 <p> <input checked="" type="checkbox"/> 180° <input type="checkbox"/> 270° <input type="checkbox"/> 45° <input type="checkbox"/> none </p>	 <p> <input type="checkbox"/> 45° <input type="checkbox"/> 90° <input type="checkbox"/> 270° <input checked="" type="checkbox"/> none </p>
 <p> <input type="checkbox"/> 90° <input type="checkbox"/> 180° <input type="checkbox"/> 270° <input checked="" type="checkbox"/> none </p>	 <p> <input type="checkbox"/> 45° <input checked="" type="checkbox"/> 240° <input checked="" type="checkbox"/> 180° <input checked="" type="checkbox"/> 300° </p>
 <p> <input checked="" type="checkbox"/> 90° <input checked="" type="checkbox"/> 180° <input checked="" type="checkbox"/> 270° <input type="checkbox"/> none </p>	 <p> <input checked="" type="checkbox"/> 45° <input checked="" type="checkbox"/> 90° <input checked="" type="checkbox"/> 135° <input type="checkbox"/> 235° </p>