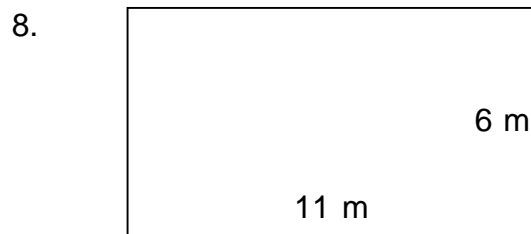
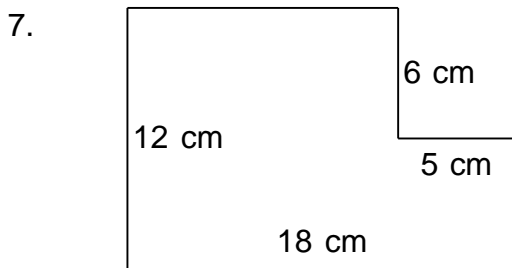
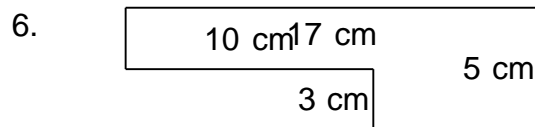
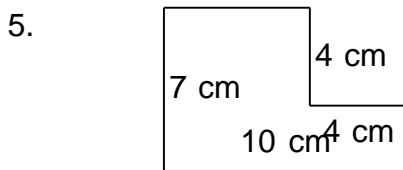
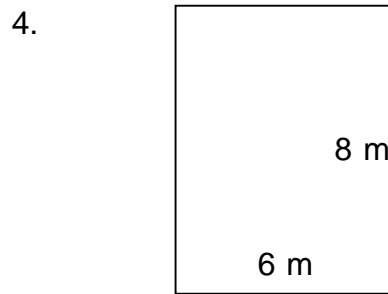

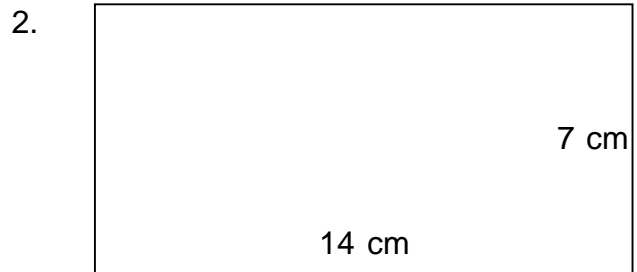
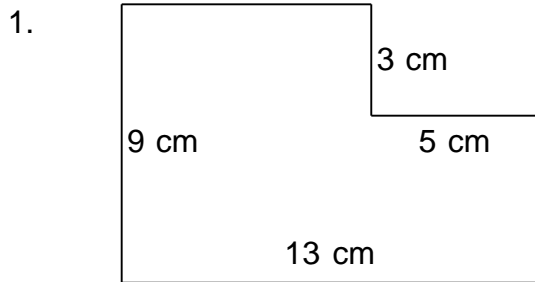


Rectangular shapes - area and perimeter (metric)

Grade 4 Geometry Worksheet

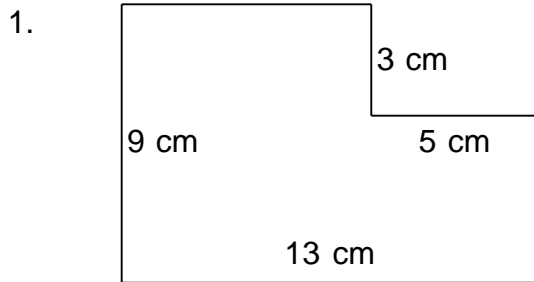
Find the perimeter and area of each rectangular shape.



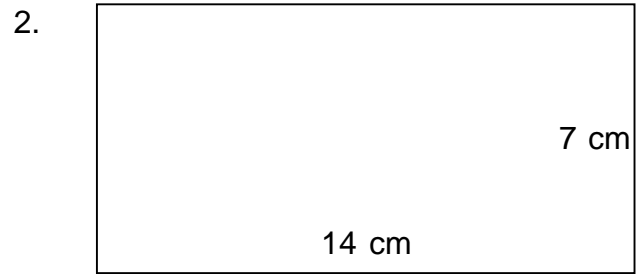
Rectangular shapes - area and perimeter (metric)

Grade 4 Geometry Worksheet


Find the perimeter and area of each rectangular shape.



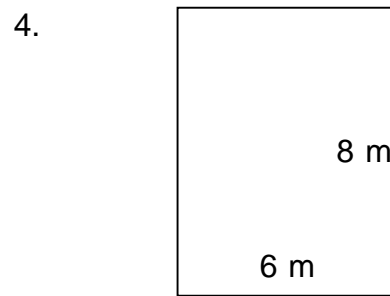
$P = 44 \text{ cm}$ $A = 102 \text{ cm}^2$



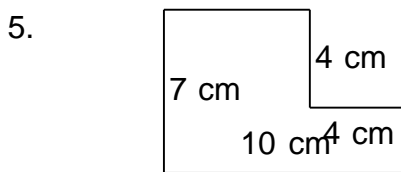
$P = 42 \text{ cm}$ $A = 98 \text{ cm}^2$



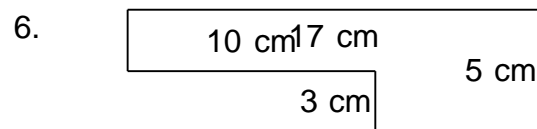
$P = 46 \text{ m}$ $A = 83 \text{ m}^2$



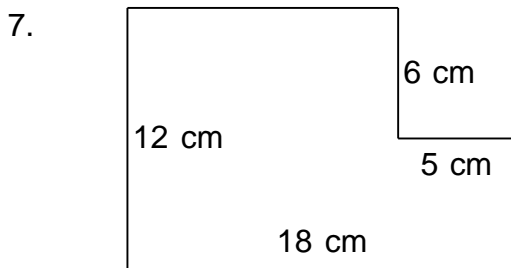
$P = 28 \text{ m}$ $A = 48 \text{ m}^2$



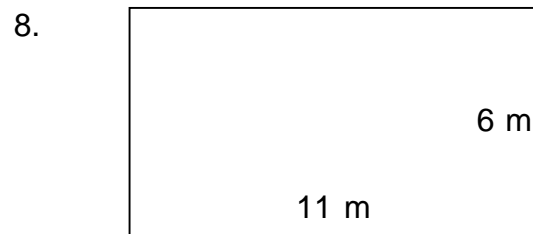
$P = 34 \text{ cm}$ $A = 54 \text{ cm}^2$



$P = 44 \text{ cm}$ $A = 55 \text{ cm}^2$



$P = 60 \text{ cm}$ $A = 186 \text{ cm}^2$



$P = 34 \text{ m}$ $A = 66 \text{ m}^2$