
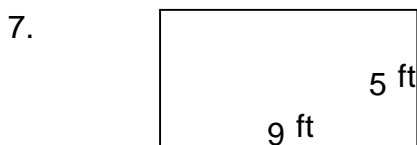
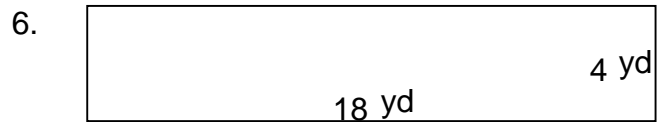
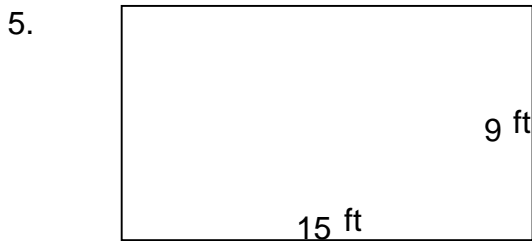
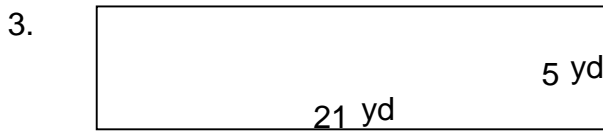
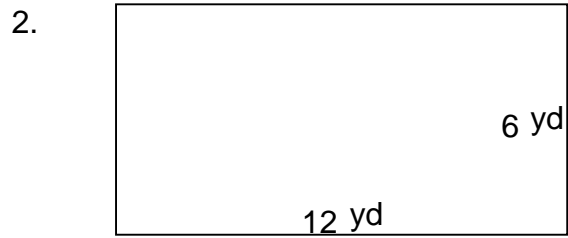
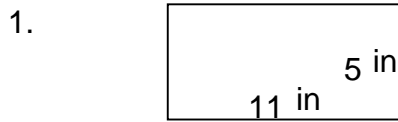


Rectangles - area and perimeter

Grade 4 Geometry Worksheet

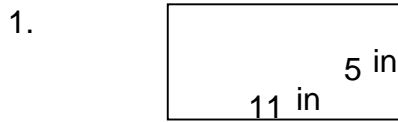
Find the perimeter and area of each rectangle.



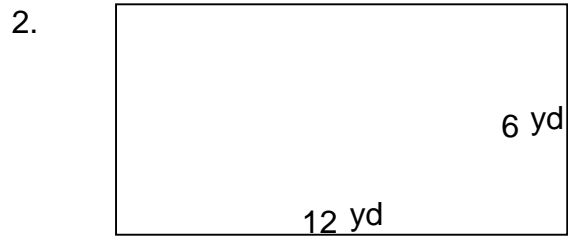
Rectangles - area and perimeter

Grade 4 Geometry Worksheet

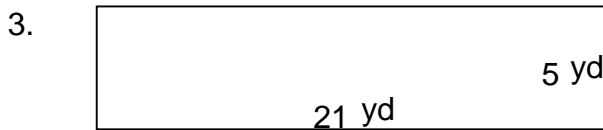
Find the perimeter and area of each rectangle.



$P = 32 \text{ in}$ $A = 55 \text{ in}^2$



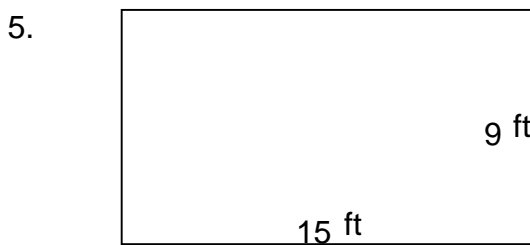
$P = 36 \text{ yd}$ $A = 72 \text{ yd}^2$



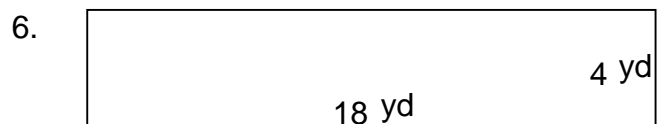
$P = 52 \text{ yd}$ $A = 105 \text{ yd}^2$



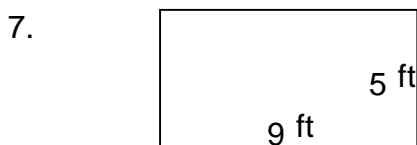
$P = 44 \text{ in}$ $A = 96 \text{ in}^2$




$P = 48 \text{ ft}$ $A = 135 \text{ ft}^2$



$P = 44 \text{ yd}$ $A = 72 \text{ yd}^2$



$P = 28 \text{ ft}$ $A = 45 \text{ ft}^2$



$P = 66 \text{ in}$ $A = 260 \text{ in}^2$