


Meaning of multiplication sentences

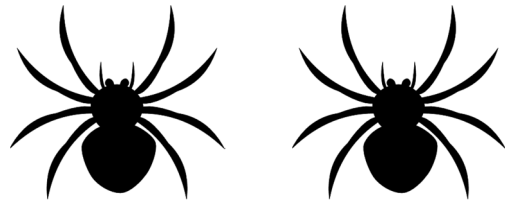
Grade 3 Multiplication Worksheet

Write the equation that describes how many objects there are.




$$\underline{\quad} \times \underline{\quad} = \underline{\quad}$$

How many cherries are there?



$$\underline{\quad} \times \underline{\quad} = \underline{\quad}$$

How many spider legs are there?




$$\underline{\quad} \times \underline{\quad} = \underline{\quad}$$

How many penguins are there?



$$\underline{\quad} \times \underline{\quad} = \underline{\quad}$$

How many flowers are there?



$$\underline{\quad} \times \underline{\quad} = \underline{\quad}$$

How many balloons are there?



$$\underline{\quad} \times \underline{\quad} = \underline{\quad}$$

How many candies are there?

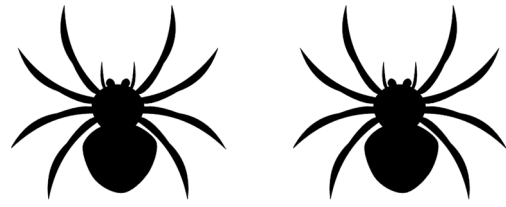
Answers



$$6 \times 2 = 12$$


How many cherries are there?

12



$$2 \times 8 = 16$$

How many spider legs are there? 16



$$4 \times 3 = 12$$

How many penguins are there?


12



$$2 \times 7 = 14$$

How many flowers are there?

14



$$2 \times 5 = 10$$

How many balloons are there?

10



$$3 \times 4 = 12$$

How many candies are there?

12