


# Identifying fractions - using blocks


## Grade 3 Fractions Worksheet


Write the fraction.

1.  = \_\_\_\_\_

2.  = \_\_\_\_\_


3.  = \_\_\_\_\_

4.  = \_\_\_\_\_


5.  = \_\_\_\_\_

6.  = \_\_\_\_\_


7.  = \_\_\_\_\_

8.  = \_\_\_\_\_


9.  = \_\_\_\_\_

10.  = \_\_\_\_\_


11.  = \_\_\_\_\_


12.  = \_\_\_\_\_


13.  = \_\_\_\_\_


14.  = \_\_\_\_\_


15.  = \_\_\_\_\_

16.  = \_\_\_\_\_

17.  = \_\_\_\_\_

18.  = \_\_\_\_\_

19.  = \_\_\_\_\_

20.  = \_\_\_\_\_


# Identifying fractions - using blocks


## Grade 3 Fractions Worksheet

Write the fraction.

1.  =  $\frac{3}{4}$  \_\_\_\_\_

2.  =  $\frac{1}{3}$  \_\_\_\_\_


3.  =  $\frac{3}{8}$  \_\_\_\_\_

4.  =  $\frac{4}{6}$  \_\_\_\_\_


5.  =  $\frac{7}{10}$  \_\_\_\_\_

6.  =  $\frac{1}{2}$  \_\_\_\_\_


7.  =  $\frac{3}{5}$  \_\_\_\_\_

8.  =  $\frac{6}{8}$  \_\_\_\_\_


9.  =  $\frac{4}{5}$  \_\_\_\_\_

10.  =  $\frac{7}{8}$  \_\_\_\_\_


11.  =  $\frac{1}{4}$  \_\_\_\_\_

12.  =  $\frac{1}{6}$  \_\_\_\_\_


13.  =  $\frac{2}{3}$  \_\_\_\_\_


14.  =  $\frac{5}{8}$  \_\_\_\_\_


15.  =  $\frac{2}{4}$  \_\_\_\_\_

16.  =  $\frac{1}{10}$  \_\_\_\_\_

17.  =  $\frac{1}{5}$  \_\_\_\_\_

18.  =  $\frac{4}{8}$  \_\_\_\_\_

19.  =  $\frac{4}{10}$  \_\_\_\_\_

20.  =  $\frac{2}{6}$  \_\_\_\_\_