




Identifying fractions - using blocks


Grade 3 Fractions Worksheet


Color the fraction.


1. $\frac{2}{8} =$ 

2. $\frac{4}{5} =$ 


3. $\frac{4}{10} =$ 

4. $\frac{2}{3} =$ 


5. $\frac{1}{3} =$ 


6. $\frac{1}{2} =$ 


7. $\frac{1}{6} =$ 

8. $\frac{3}{5} =$ 


9. $\frac{4}{8} =$ 


10. $\frac{1}{4} =$ 


11. $\frac{3}{6} =$ 

12. $\frac{3}{8} =$ 

13. $\frac{7}{10} =$ 


14. $\frac{2}{5} =$ 

15. $\frac{5}{8} =$ 

16. $\frac{3}{4} =$ 

17. $\frac{2}{6} =$ 

18. $\frac{3}{10} =$ 

19. $\frac{6}{10} =$ 


20. $\frac{6}{8} =$ 


Identifying fractions - using blocks


Grade 3 Fractions Worksheet


Color the fraction.


1. $\frac{2}{8} =$ 

2. $\frac{4}{5} =$ 


3. $\frac{4}{10} =$ 

4. $\frac{2}{3} =$ 

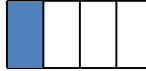
5. $\frac{1}{3} =$ 

6. $\frac{1}{2} =$ 

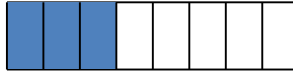
7. $\frac{1}{6} =$ 


8. $\frac{3}{5} =$ 


9. $\frac{4}{8} =$ 

10. $\frac{1}{4} =$ 


11. $\frac{3}{6} =$ 

12. $\frac{3}{8} =$ 

13. $\frac{7}{10} =$ 


14. $\frac{2}{5} =$ 

15. $\frac{5}{8} =$ 

16. $\frac{3}{4} =$ 

17. $\frac{2}{6} =$ 

18. $\frac{3}{10} =$ 

19. $\frac{6}{10} =$ 

20. $\frac{6}{8} =$ 