











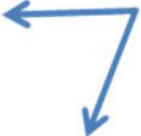










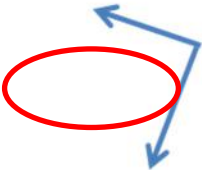










Comparing angles with right angles

Grade 3 Geometry Worksheet

Are the following angles smaller than, larger than, or equal to a right angle?

| | | | |
|---|---|--|---|
|  |  |  |  |
| Smaller / Larger / Right | Smaller / Larger / Right | Smaller / Larger / Right | Smaller / Larger / Right |
|  |  |  |  |
| Smaller / Larger / Right | Smaller / Larger / Right | Smaller / Larger / Right | Smaller / Larger / Right |
|  |  |  |  |
| Smaller / Larger / Right | Smaller / Larger / Right | Smaller / Larger / Right | Smaller / Larger / Right |
|  |  |  |  |
| Smaller / Larger / Right | Smaller / Larger / Right | Smaller / Larger / Right | Smaller / Larger / Right |

Answers

| | | | |
|---|---|--|---|
|  |  |  |  |
| Smaller / Larger / Right | Smaller / Larger / Right | Smaller / Larger / Right | Smaller / Larger / Right |
|  |  |  |  |
| Smaller / Larger / Right | Smaller / Larger / Right | Smaller / Larger / Right | Smaller / Larger / Right |
|  |  |  |  |
| Smaller / Larger / Right | Smaller / Larger / Right | Smaller / Larger / Right | Smaller / Larger / Right |
|  |  |  |  |
| Smaller / Larger / Right | Smaller / Larger / Right | Smaller / Larger / Right | Smaller / Larger / Right |